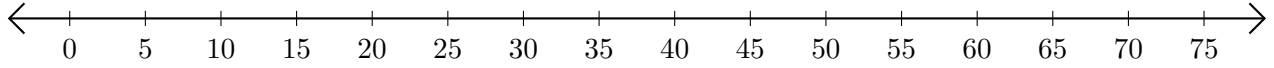


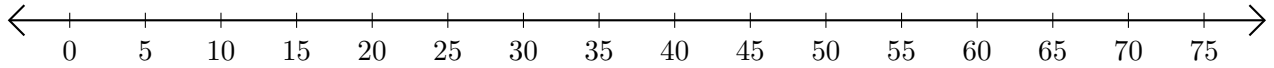
Soustraction de Nombres - Droite Graduée (A)

Utilisez la droite graduée pour calculer chaque différence.

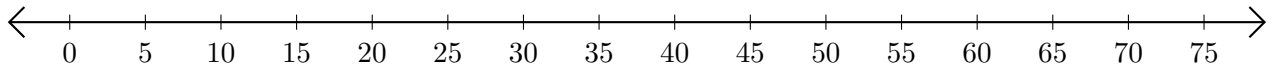
1. $70 - 20 = \underline{\quad}$



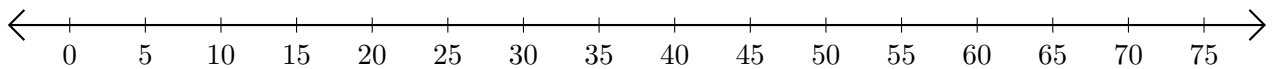
2. $75 - 70 = \underline{\quad}$



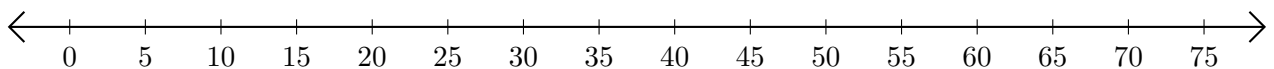
3. $45 - 40 = \underline{\quad}$



4. $75 - 35 = \underline{\quad}$



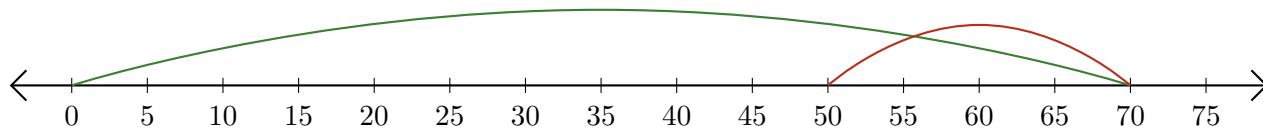
5. $75 - 45 = \underline{\quad}$



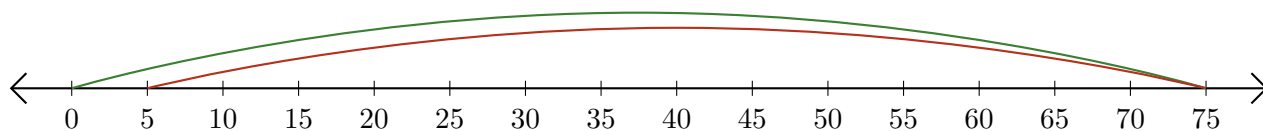
Soustraction de Nombres - Droite Graduée (A) Réponses

Utilisez la droite graduée pour calculer chaque différence.

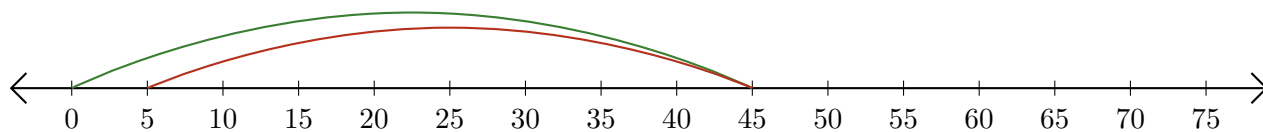
1. $70 - 20 = \underline{50}$



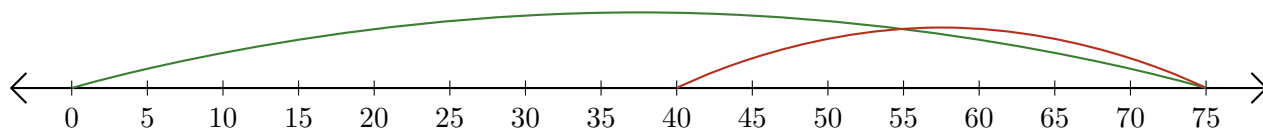
2. $75 - 70 = \underline{5}$



3. $45 - 40 = \underline{5}$



4. $75 - 35 = \underline{40}$



5. $75 - 45 = \underline{30}$

