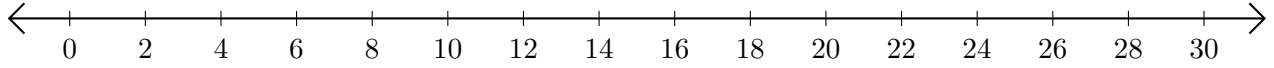


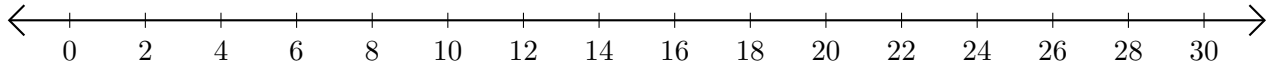
# Soustraction de Nombres - Droite Graduée (F)

Utilisez la droite graduée pour calculer chaque différence.

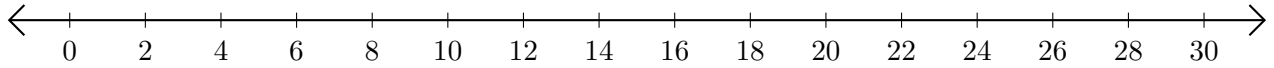
1.  $26 - 2 = \underline{\quad}$



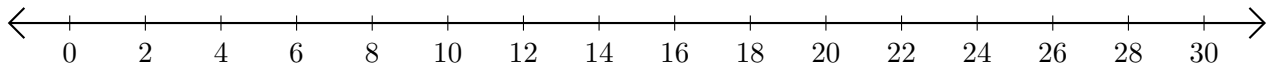
2.  $22 - 14 = \underline{\quad}$



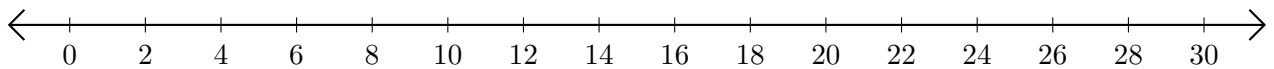
3.  $18 - 10 = \underline{\quad}$



4.  $20 - 16 = \underline{\quad}$



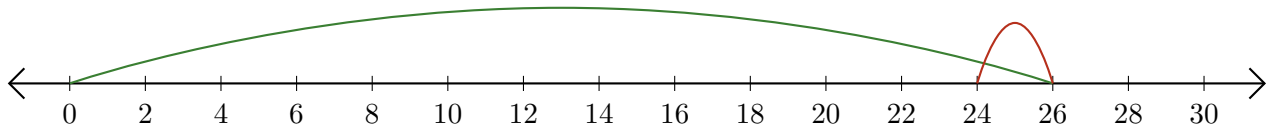
5.  $30 - 24 = \underline{\quad}$



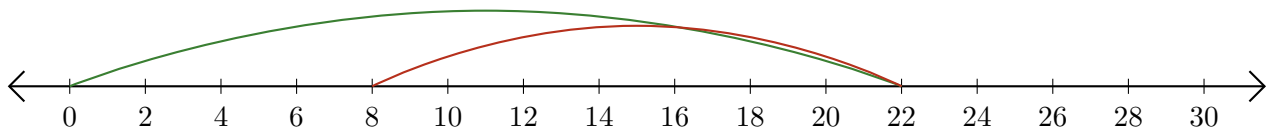
# Soustraction de Nombres - Droite Graduée (F) Réponses

Utilisez la droite graduée pour calculer chaque différence.

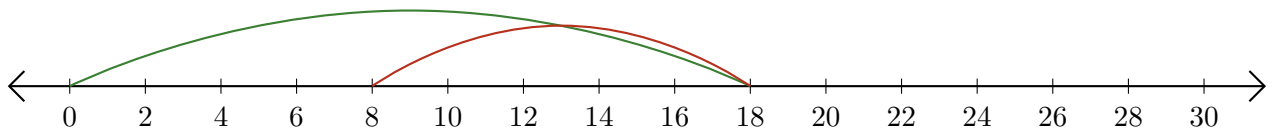
1.  $26 - 2 = \underline{24}$



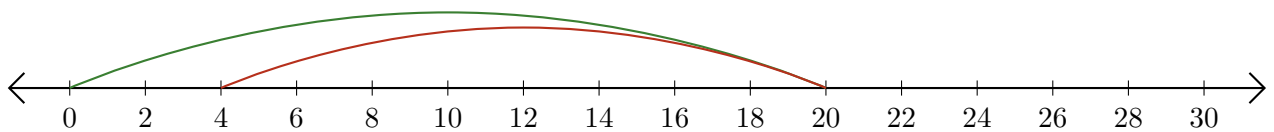
2.  $22 - 14 = \underline{8}$



3.  $18 - 10 = \underline{8}$



4.  $20 - 16 = \underline{4}$



5.  $30 - 24 = \underline{6}$

