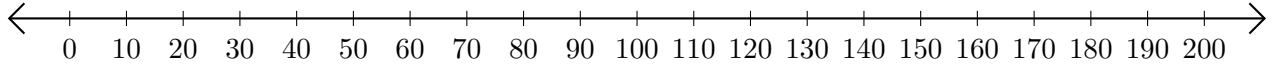


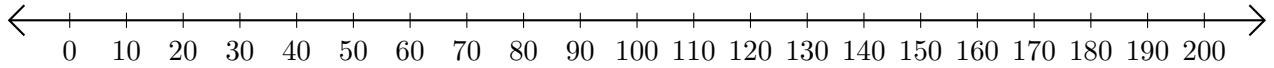
Soustraction de Nombres - Droite Graduée (A)

Utilisez la droite graduée pour calculer chaque différence.

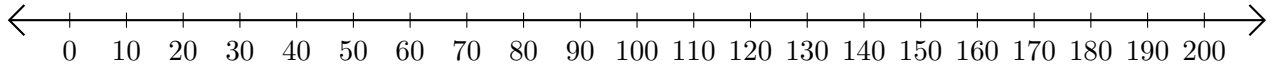
1. $130 - 100 = \underline{\quad}$



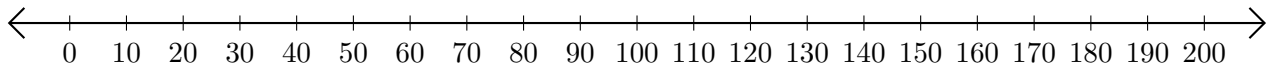
2. $60 - 50 = \underline{\quad}$



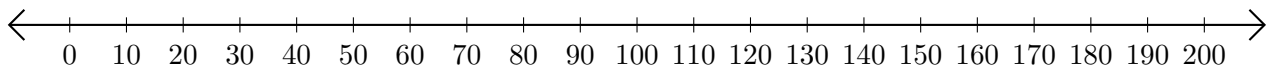
3. $190 - 140 = \underline{\quad}$



4. $190 - 160 = \underline{\quad}$



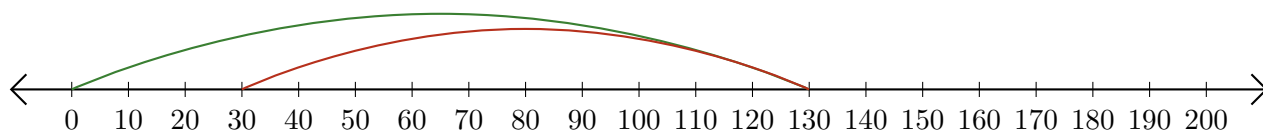
5. $200 - 170 = \underline{\quad}$



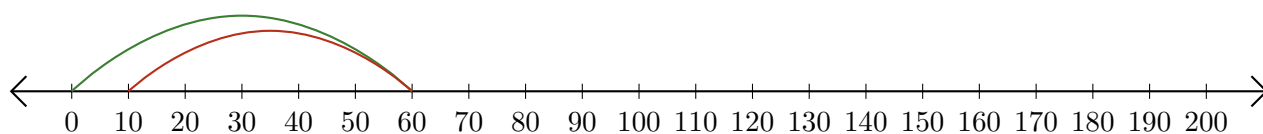
Soustraction de Nombres - Droite Graduée (A) Réponses

Utilisez la droite graduée pour calculer chaque différence.

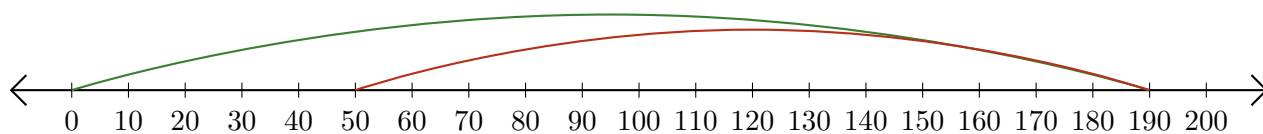
1. $130 - 100 = \underline{30}$



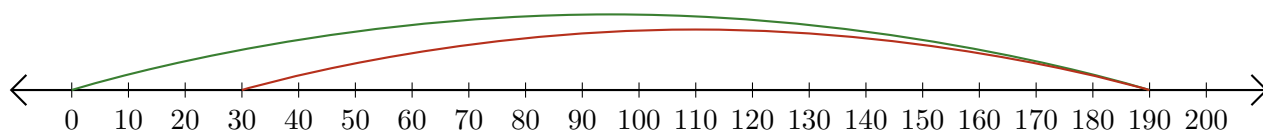
2. $60 - 50 = \underline{10}$



3. $190 - 140 = \underline{50}$



4. $190 - 160 = \underline{30}$



5. $200 - 170 = \underline{30}$

