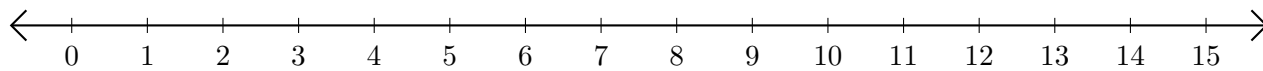


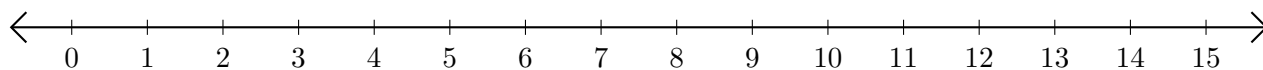
# Soustraction de Nombres - Droite Graduée (I)

Utilisez la droite graduée pour calculer chaque différence.

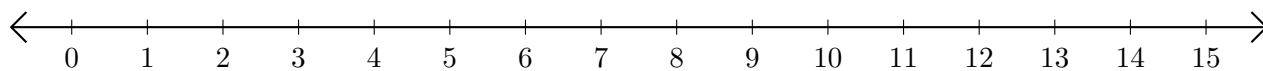
1.  $14 - 13 = \underline{\quad}$



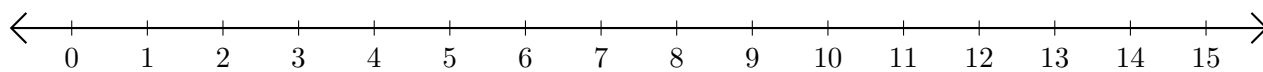
2.  $14 - 7 = \underline{\quad}$



3.  $14 - 11 = \underline{\quad}$



4.  $11 - 8 = \underline{\quad}$



5.  $7 - 3 = \underline{\quad}$

