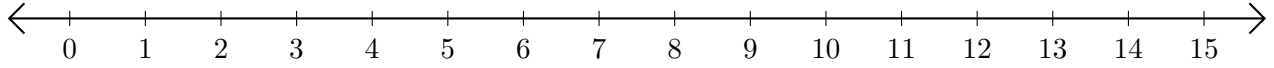


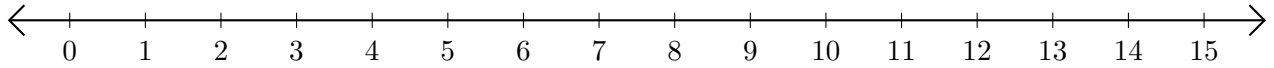
Soustraction de Nombres - Droite Graduée (I)

Utilisez la droite graduée pour calculer chaque différence.

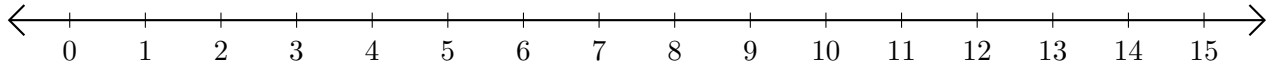
1. $14 - 13 = \underline{\quad}$



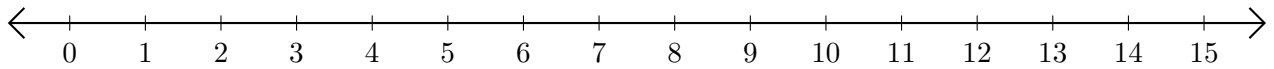
2. $14 - 7 = \underline{\quad}$



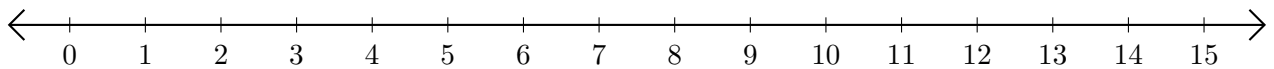
3. $14 - 11 = \underline{\quad}$



4. $11 - 8 = \underline{\quad}$



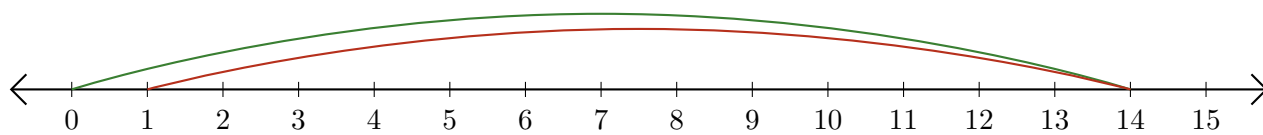
5. $7 - 3 = \underline{\quad}$



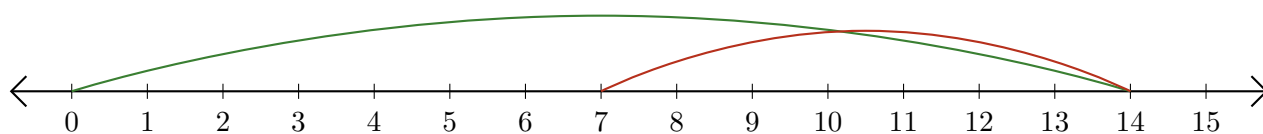
Soustraction de Nombres - Droite Graduée (I) Réponses

Utilisez la droite graduée pour calculer chaque différence.

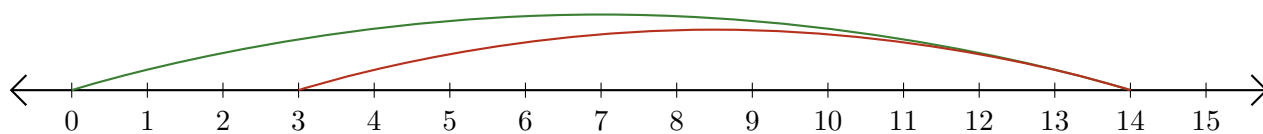
1. $14 - 13 = \underline{1}$



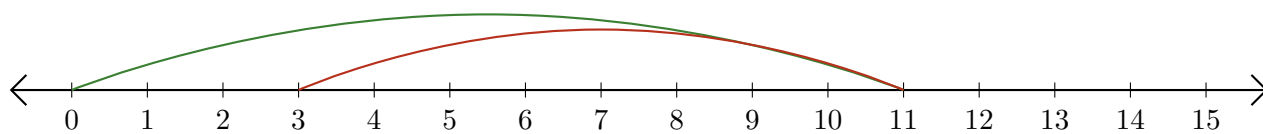
2. $14 - 7 = \underline{7}$



3. $14 - 11 = \underline{3}$



4. $11 - 8 = \underline{3}$



5. $7 - 3 = \underline{4}$

