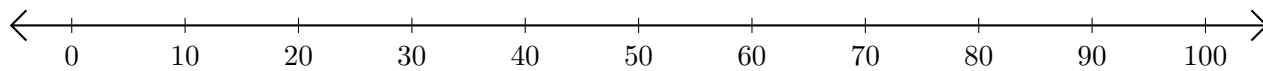


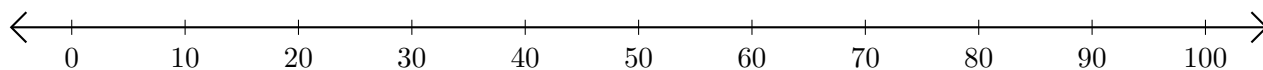
Soustraction de Nombres - Droite Graduée (I)

Utilisez la droite graduée pour calculer chaque différence.

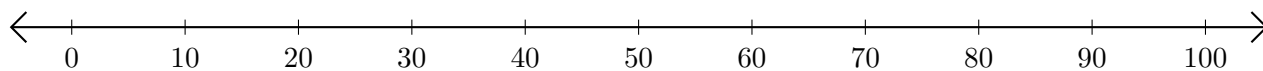
1. $100 - 50 = \underline{\quad}$



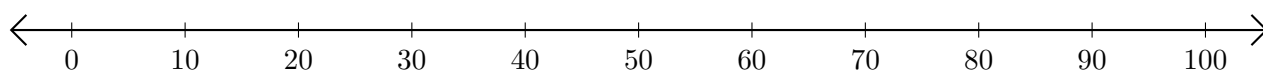
2. $100 - 30 = \underline{\quad}$



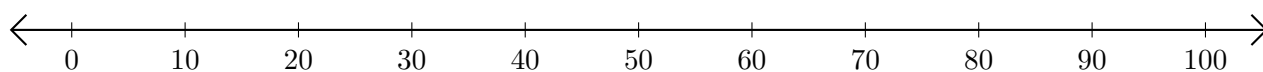
3. $50 - 40 = \underline{\quad}$



4. $100 - 80 = \underline{\quad}$



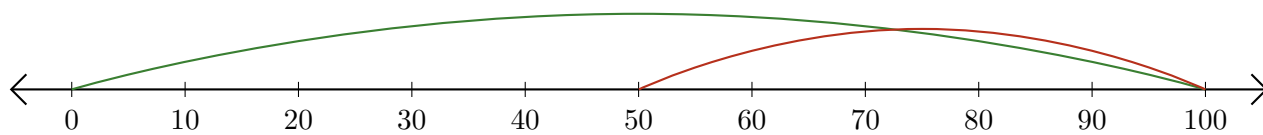
5. $80 - 20 = \underline{\quad}$



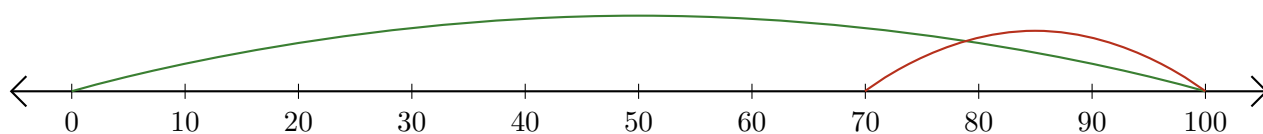
Soustraction de Nombres - Droite Graduée (I) Réponses

Utilisez la droite graduée pour calculer chaque différence.

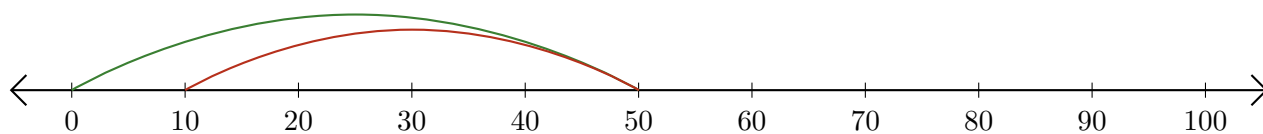
1. $100 - 50 = \underline{50}$



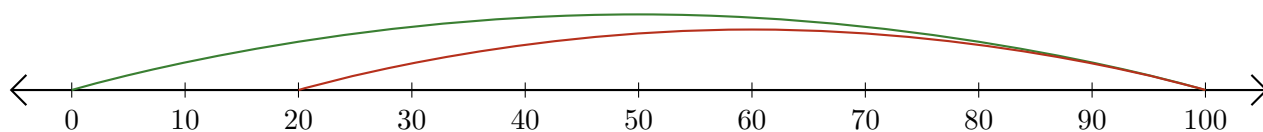
2. $100 - 30 = \underline{70}$



3. $50 - 40 = \underline{10}$



4. $100 - 80 = \underline{20}$



5. $80 - 20 = \underline{60}$

