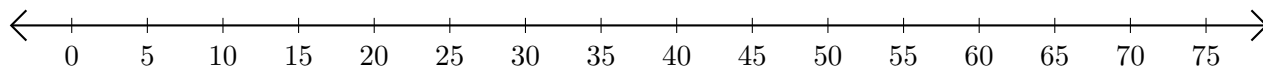


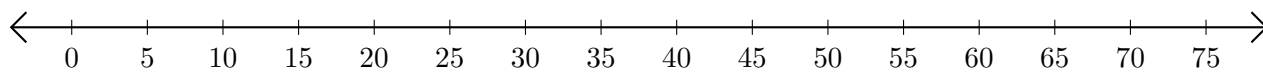
Addition de Nombres sur une Droite Graduée (A)

Utilisez la droite graduée pour calculer chaque somme.

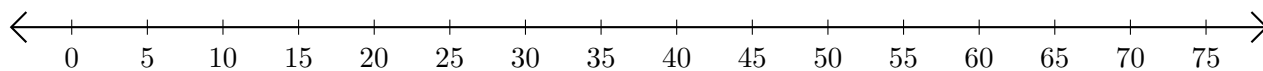
1. $50 + 20 = \underline{\quad}$



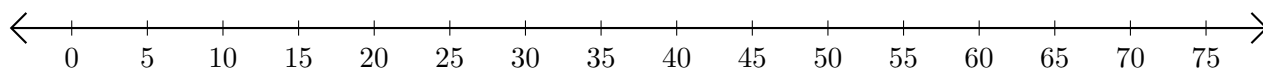
2. $30 + 45 = \underline{\quad}$



3. $20 + 15 = \underline{\quad}$



4. $5 + 45 = \underline{\quad}$



5. $10 + 50 = \underline{\quad}$

