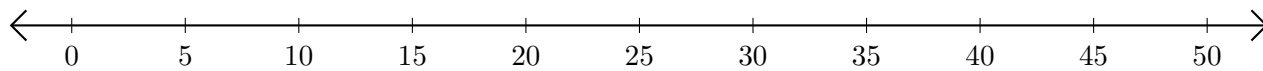


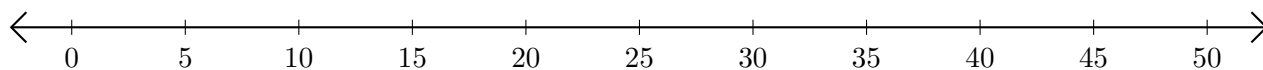
# Addition de Nombres sur une Droite Graduée (A)

Utilisez la droite graduée pour calculer chaque somme.

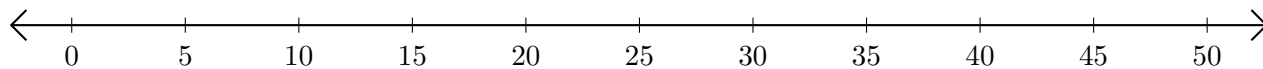
1.  $5 + 30 = \underline{\quad}$



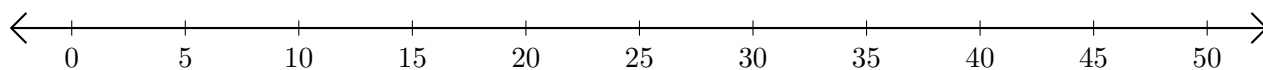
2.  $35 + 5 = \underline{\quad}$



3.  $15 + 30 = \underline{\quad}$



4.  $45 + 5 = \underline{\quad}$



5.  $10 + 10 = \underline{\quad}$

