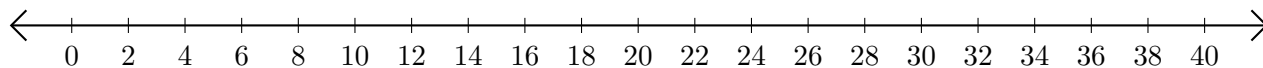


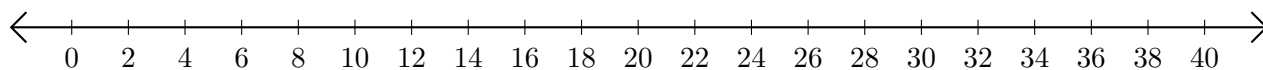
Addition de Nombres sur une Droite Graduée (G)

Utilisez la droite graduée pour calculer chaque somme.

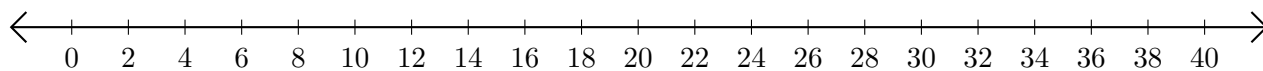
1. $34 + 6 = \underline{\quad}$



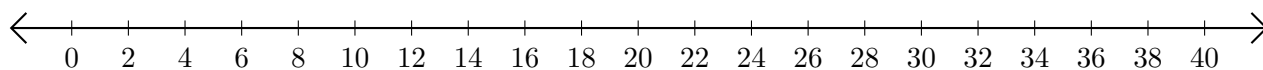
2. $14 + 8 = \underline{\quad}$



3. $38 + 2 = \underline{\quad}$



4. $10 + 22 = \underline{\quad}$



5. $36 + 2 = \underline{\quad}$

