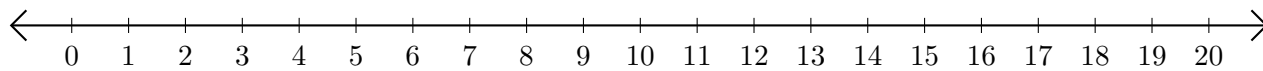


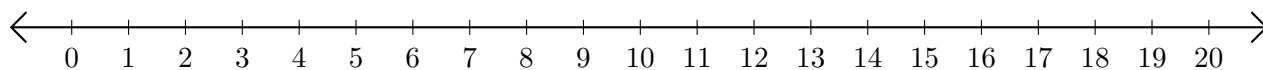
Addition de Nombres sur une Droite Graduée (A)

Utilisez la droite graduée pour calculer chaque somme.

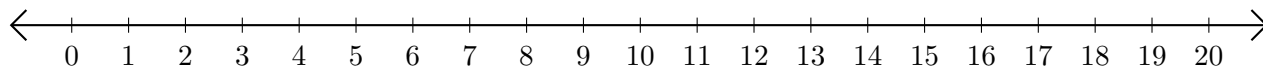
1. $17 + 3 = \underline{\quad}$



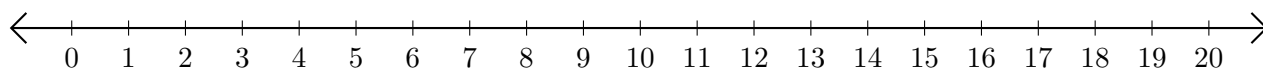
2. $15 + 4 = \underline{\quad}$



3. $7 + 5 = \underline{\quad}$



4. $14 + 6 = \underline{\quad}$



5. $19 + 1 = \underline{\quad}$

