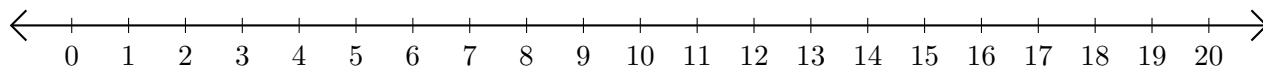


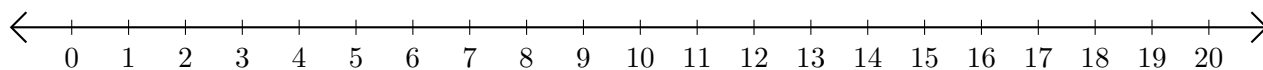
# Addition de Nombres sur une Droite Graduée (A)

Utilisez la droite graduée pour calculer chaque somme.

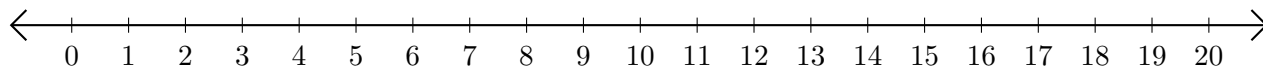
1.  $17 + 3 = \underline{\quad}$



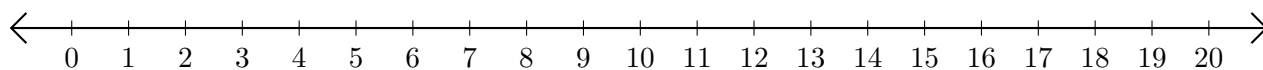
2.  $15 + 4 = \underline{\quad}$



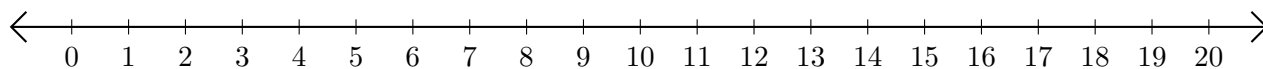
3.  $7 + 5 = \underline{\quad}$



4.  $14 + 6 = \underline{\quad}$



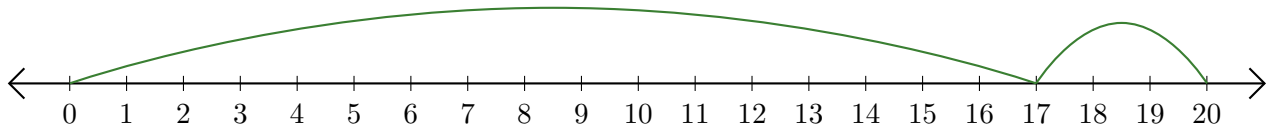
5.  $19 + 1 = \underline{\quad}$



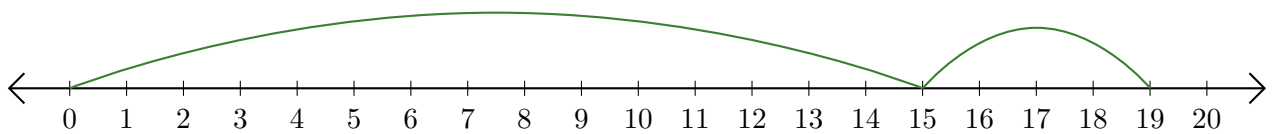
# Addition de Nombres sur une Droite Graduée (A) Réponses

Utilisez la droite graduée pour calculer chaque somme.

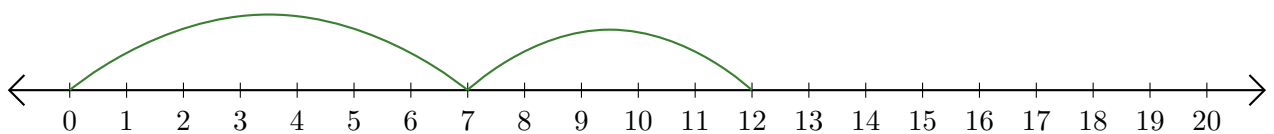
1.  $17 + 3 = \underline{20}$



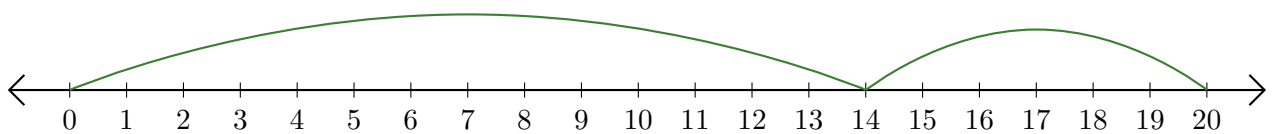
2.  $15 + 4 = \underline{19}$



3.  $7 + 5 = \underline{12}$



4.  $14 + 6 = \underline{20}$



5.  $19 + 1 = \underline{20}$

