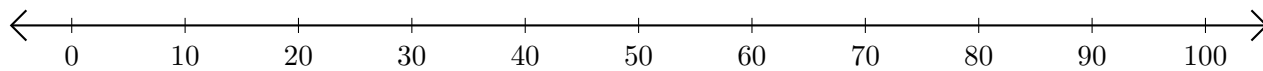


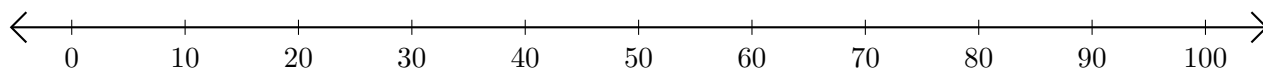
Addition de Nombres sur une Droite Graduée (C)

Utilisez la droite graduée pour calculer chaque somme.

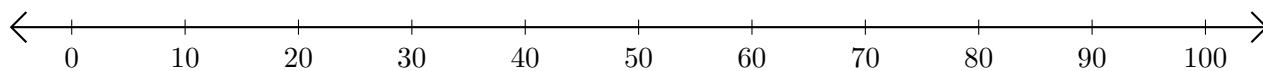
1. $40 + 20 = \underline{\quad}$



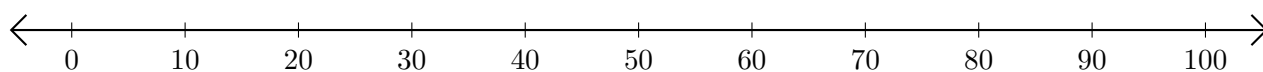
2. $70 + 20 = \underline{\quad}$



3. $50 + 40 = \underline{\quad}$



4. $60 + 20 = \underline{\quad}$



5. $20 + 30 = \underline{\quad}$

