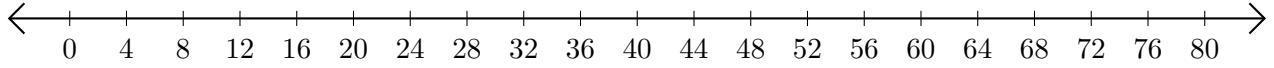


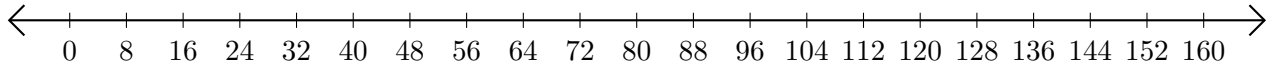
Opérations sur Une Droite Graduée (A)

Utilisez la droite graduée pour calculer chaque somme ou différence.

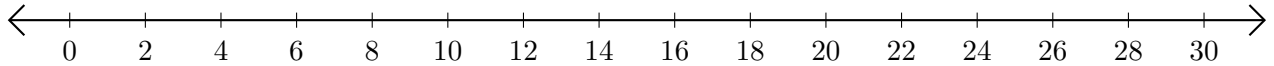
1. $68 + 4 = \underline{\quad}$



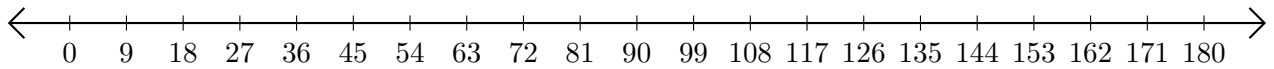
2. $80 - 48 = \underline{\quad}$



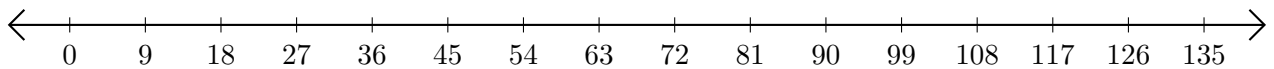
3. $22 + 2 = \underline{\quad}$



4. $153 - 99 = \underline{\quad}$



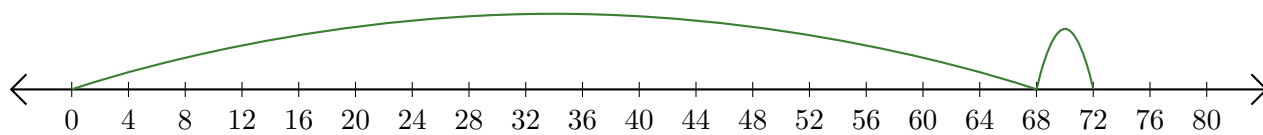
5. $135 - 117 = \underline{\quad}$



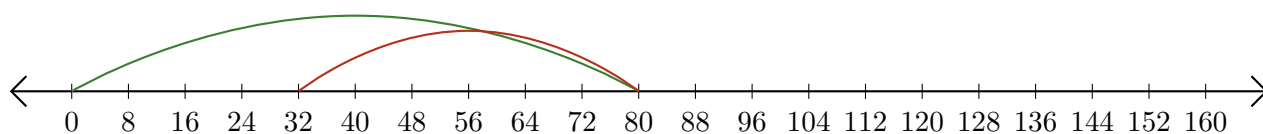
Opérations sur Une Droite Graduée (A) Réponses

Utilisez la droite graduée pour calculer chaque somme ou différence.

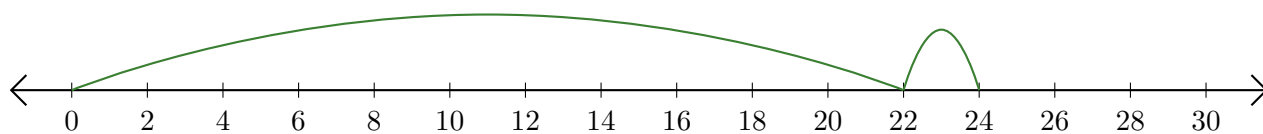
1. $68 + 4 = \underline{72}$



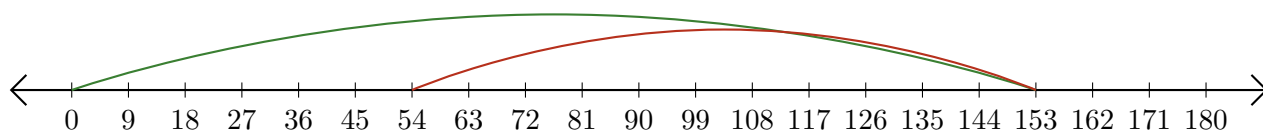
2. $80 - 48 = \underline{32}$



3. $22 + 2 = \underline{24}$



4. $153 - 99 = \underline{54}$



5. $135 - 117 = \underline{18}$

