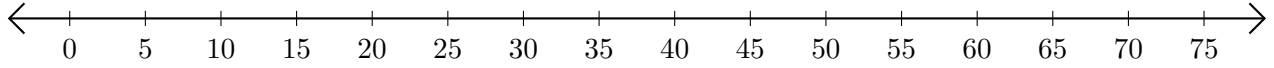


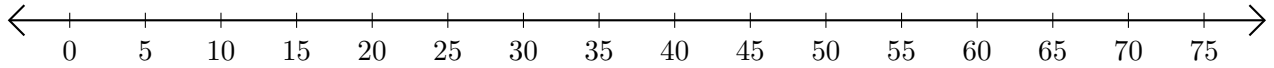
Opérations sur Une Droite Graduée (F)

Utilisez la droite graduée pour calculer chaque somme ou différence.

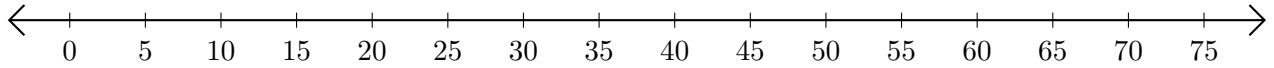
1. $40 + 30 = \underline{\quad}$



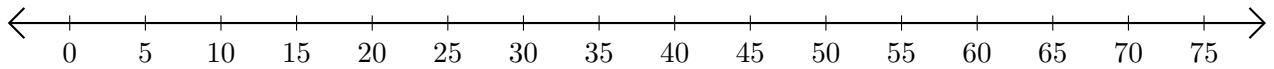
2. $60 - 45 = \underline{\quad}$



3. $50 + 20 = \underline{\quad}$



4. $65 - 60 = \underline{\quad}$



5. $70 - 35 = \underline{\quad}$

