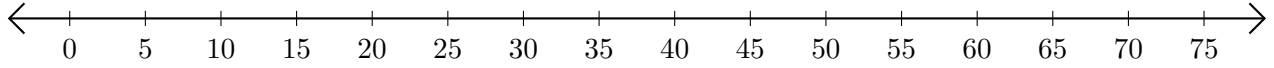


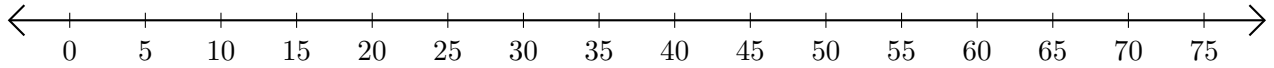
Opérations sur Une Droite Graduée (D)

Utilisez la droite graduée pour calculer chaque somme ou différence.

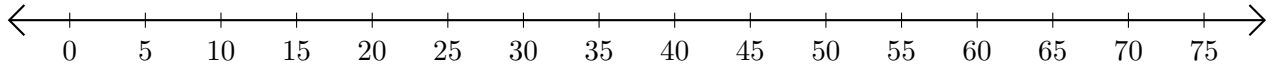
1. $50 + 10 = \underline{\hspace{2cm}}$



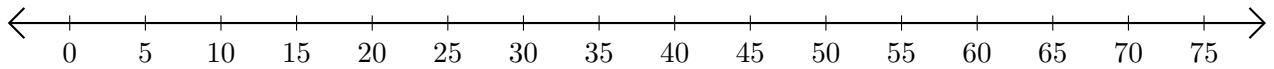
2. $75 - 70 = \underline{\hspace{2cm}}$



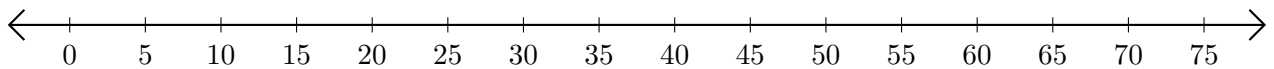
3. $65 + 10 = \underline{\hspace{2cm}}$



4. $60 - 10 = \underline{\hspace{2cm}}$



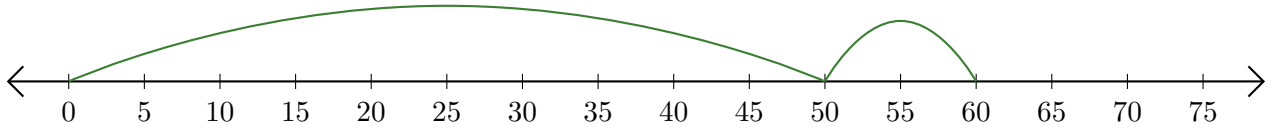
5. $60 + 5 = \underline{\hspace{2cm}}$



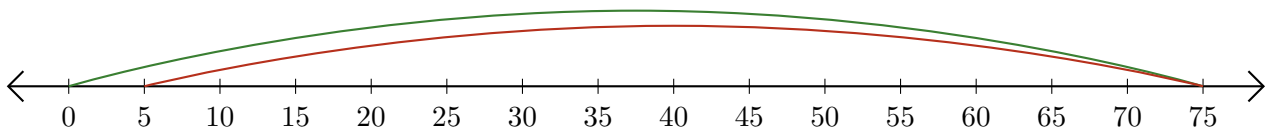
Opérations sur Une Droite Graduée (D) Réponses

Utilisez la droite graduée pour calculer chaque somme ou différence.

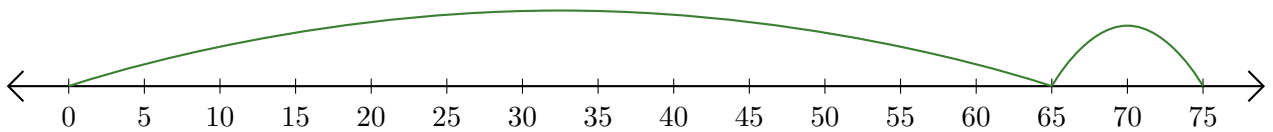
1. $50 + 10 = \underline{60}$



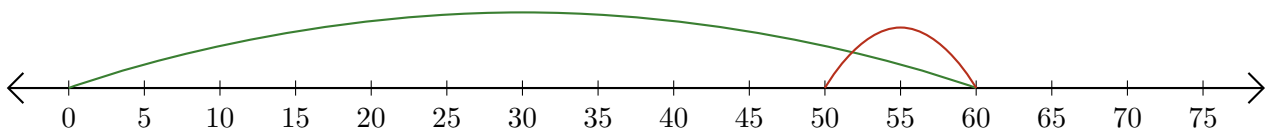
2. $75 - 70 = \underline{5}$



3. $65 + 10 = \underline{75}$



4. $60 - 10 = \underline{50}$



5. $60 + 5 = \underline{65}$

