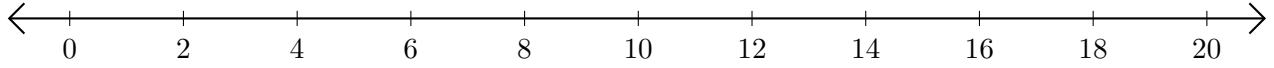


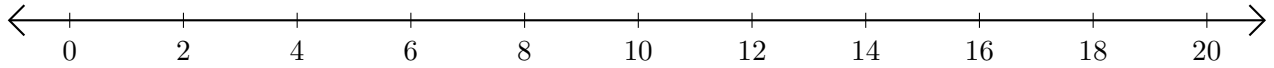
Opérations sur Une Droite Graduée (D)

Utilisez la droite graduée pour calculer chaque somme ou différence.

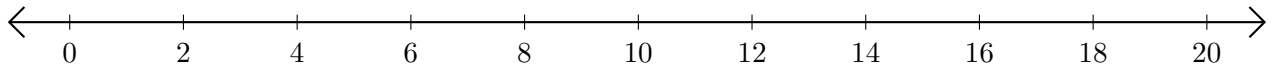
1. $14 + 4 = \underline{\quad}$



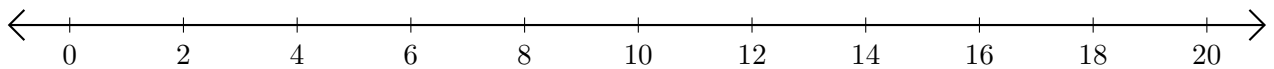
2. $18 - 10 = \underline{\quad}$



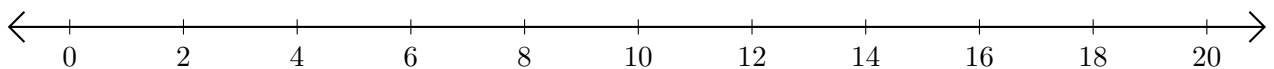
3. $2 + 10 = \underline{\quad}$



4. $20 - 16 = \underline{\quad}$



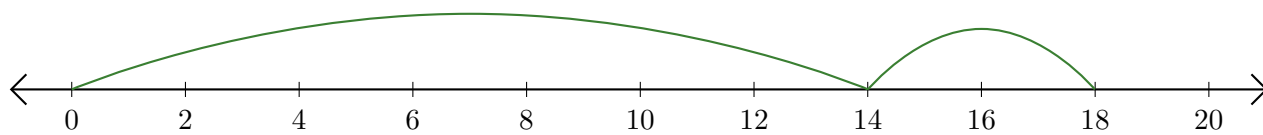
5. $18 + 2 = \underline{\quad}$



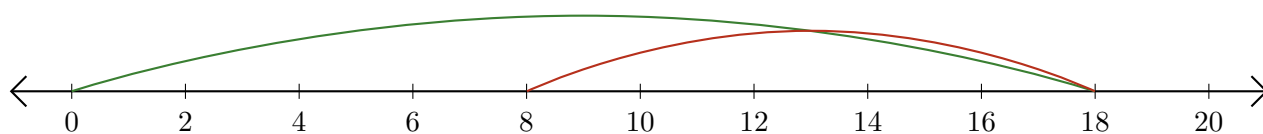
Opérations sur Une Droite Graduée (D) Réponses

Utilisez la droite graduée pour calculer chaque somme ou différence.

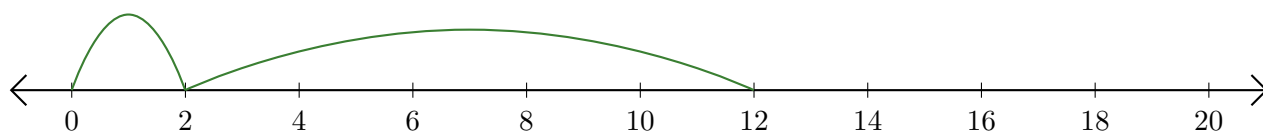
1. $14 + 4 = \underline{18}$



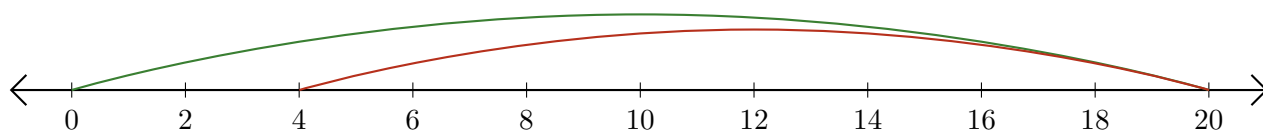
2. $18 - 10 = \underline{8}$



3. $2 + 10 = \underline{12}$



4. $20 - 16 = \underline{4}$



5. $18 + 2 = \underline{20}$

