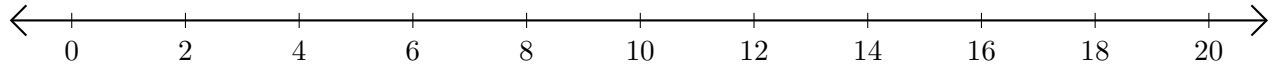


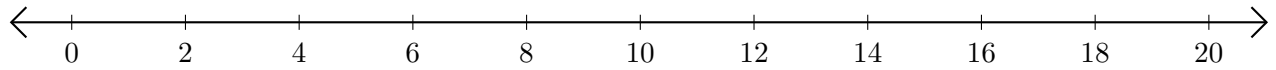
## Opérations sur Une Droite Graduée (B)

Utilisez la droite graduée pour calculer chaque somme ou différence.

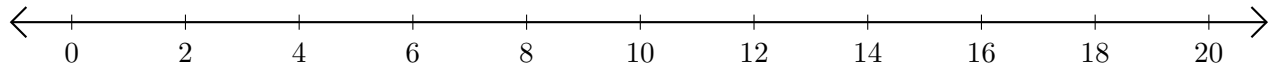
1.  $6 + 12 = \underline{\quad}$



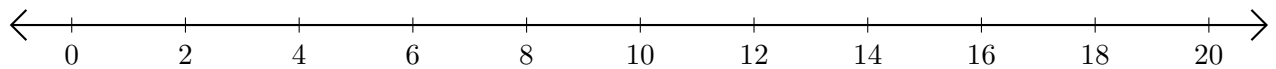
2.  $20 - 14 = \underline{\quad}$



3.  $12 + 8 = \underline{\quad}$



4.  $16 - 8 = \underline{\quad}$



5.  $18 - 16 = \underline{\quad}$

