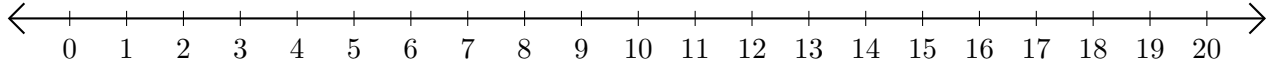


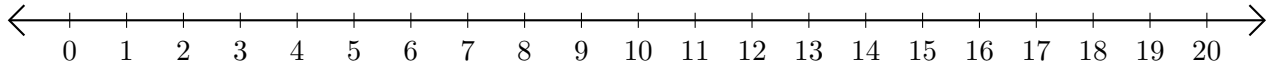
Opérations sur Une Droite Graduée (C)

Utilisez la droite graduée pour calculer chaque somme ou différence.

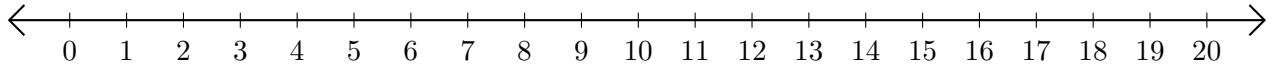
1. $5 + 4 = \underline{\quad}$



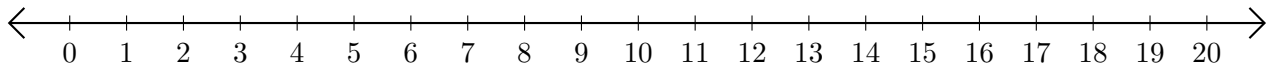
2. $15 - 13 = \underline{\quad}$



3. $7 + 10 = \underline{\quad}$



4. $4 - 2 = \underline{\quad}$



5. $3 + 16 = \underline{\quad}$

