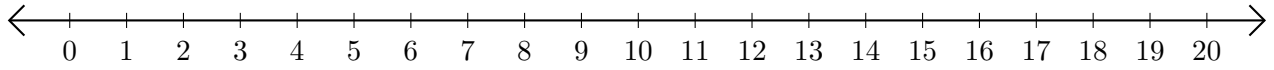


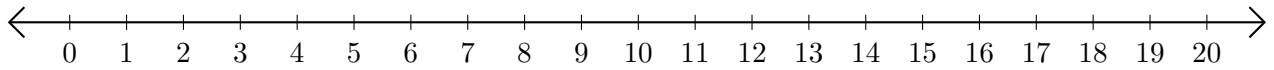
Opérations sur Une Droite Graduée (A)

Utilisez la droite graduée pour calculer chaque somme ou différence.

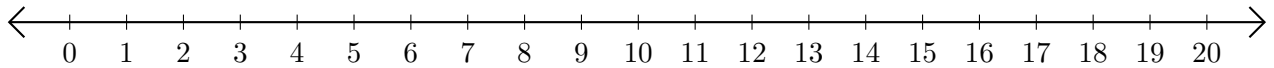
1. $14 + 2 = \underline{\quad}$



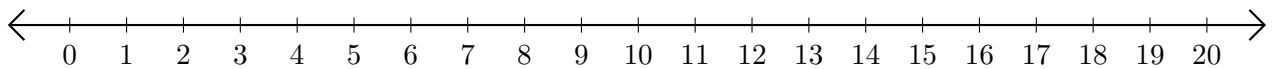
2. $12 - 1 = \underline{\quad}$



3. $8 + 4 = \underline{\quad}$



4. $7 - 4 = \underline{\quad}$



5. $14 - 2 = \underline{\quad}$

