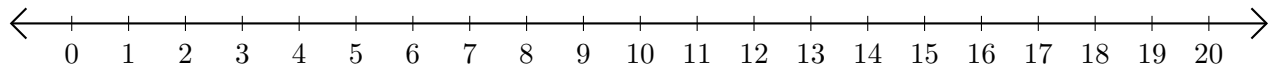


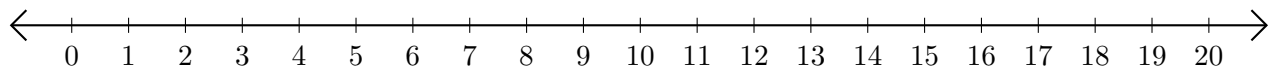
# Opérations sur Une Droite Graduée (A)

Utilisez la droite graduée pour calculer chaque somme ou différence.

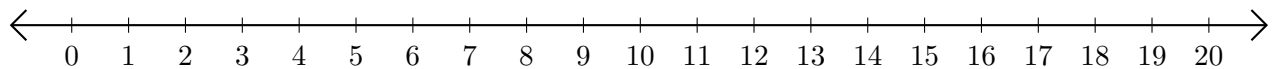
1.  $14 + 2 = \underline{\quad}$



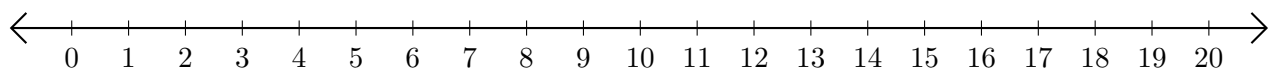
2.  $12 - 1 = \underline{\quad}$



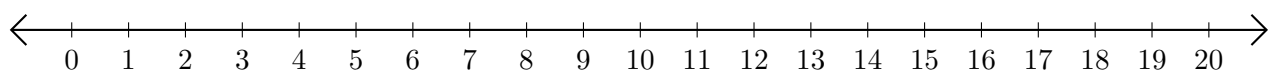
3.  $8 + 4 = \underline{\quad}$



4.  $7 - 4 = \underline{\quad}$



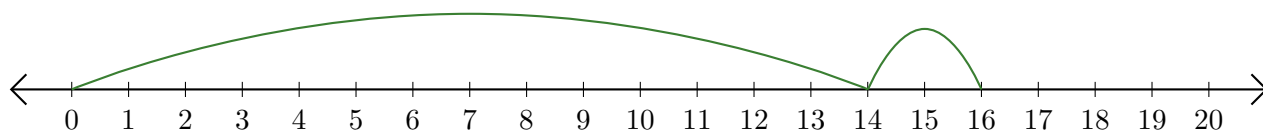
5.  $14 - 2 = \underline{\quad}$



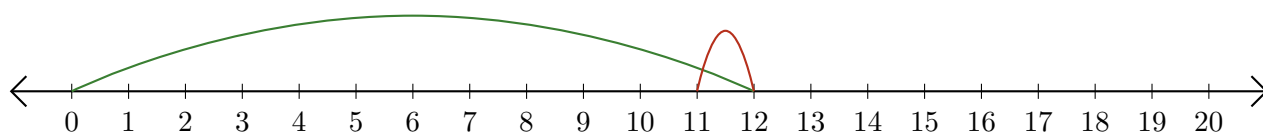
# Opérations sur Une Droite Graduée (A) Réponses

Utilisez la droite graduée pour calculer chaque somme ou différence.

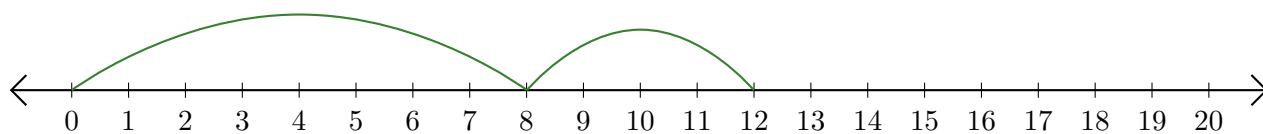
1.  $14 + 2 = \underline{16}$



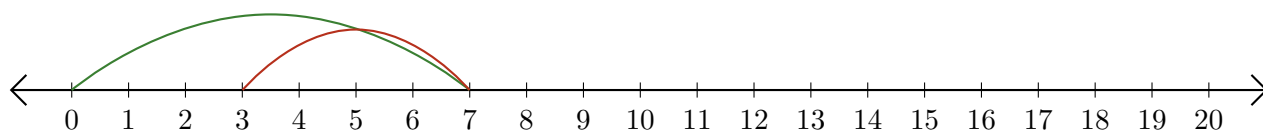
2.  $12 - 1 = \underline{11}$



3.  $8 + 4 = \underline{12}$



4.  $7 - 4 = \underline{3}$



5.  $14 - 2 = \underline{12}$

