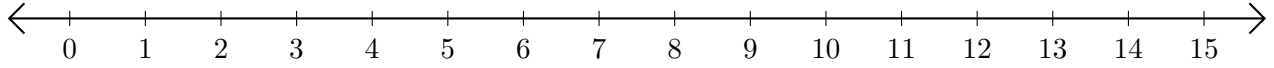


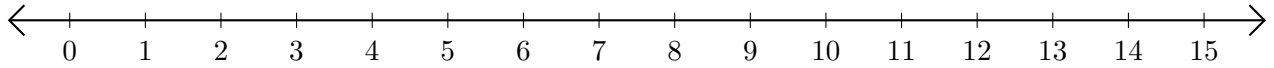
Opérations sur Une Droite Graduée (H)

Utilisez la droite graduée pour calculer chaque somme ou différence.

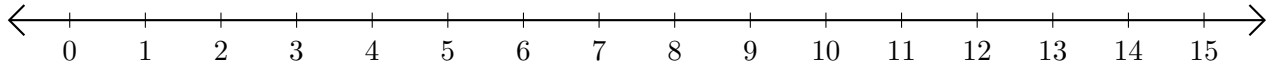
1. $2 + 13 = \underline{\quad}$



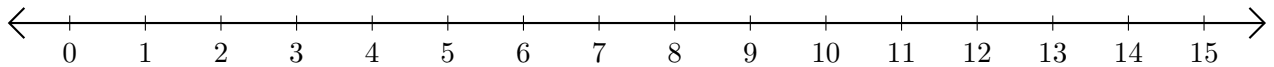
2. $10 - 9 = \underline{\quad}$



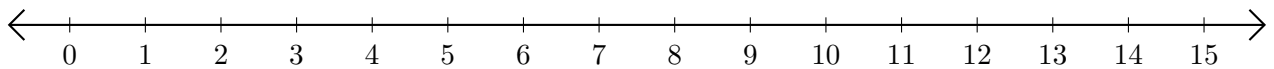
3. $4 + 8 = \underline{\quad}$



4. $13 - 5 = \underline{\quad}$



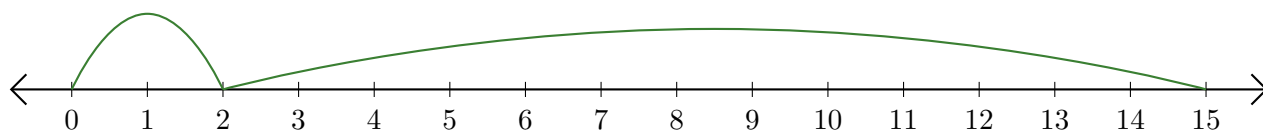
5. $13 + 1 = \underline{\quad}$



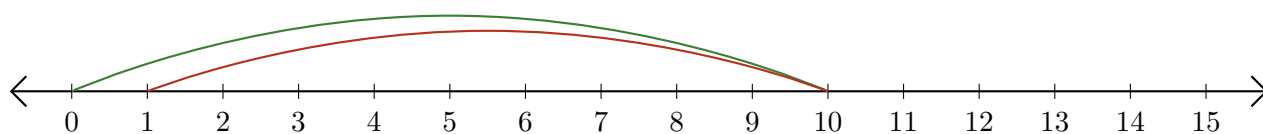
Opérations sur Une Droite Graduée (H) Réponses

Utilisez la droite graduée pour calculer chaque somme ou différence.

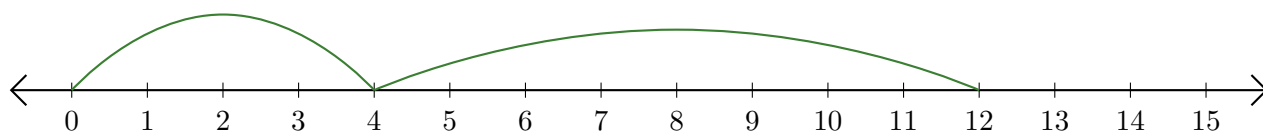
1. $2 + 13 = \underline{15}$



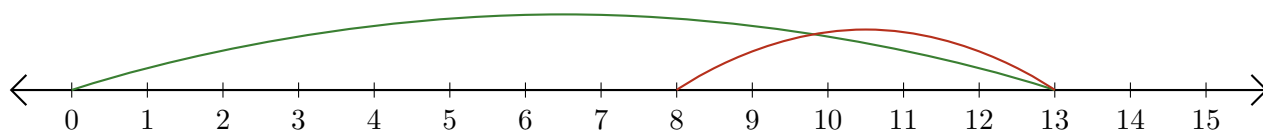
2. $10 - 9 = \underline{1}$



3. $4 + 8 = \underline{12}$



4. $13 - 5 = \underline{8}$



5. $13 + 1 = \underline{14}$

