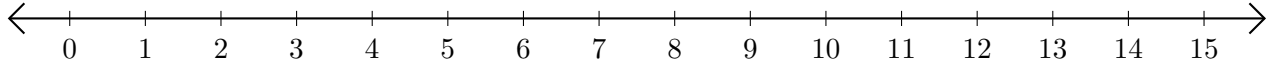


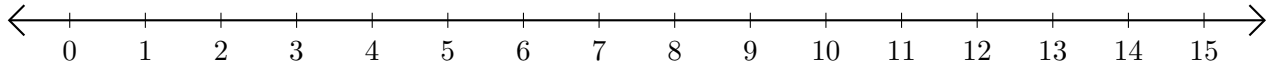
Opérations sur Une Droite Graduée (B)

Utilisez la droite graduée pour calculer chaque somme ou différence.

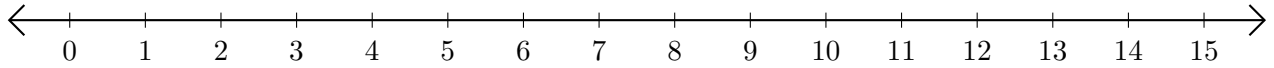
1. $14 + 1 = \underline{\quad}$



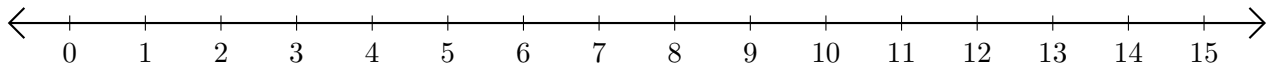
2. $14 - 13 = \underline{\quad}$



3. $11 + 1 = \underline{\quad}$



4. $14 - 2 = \underline{\quad}$



5. $6 - 1 = \underline{\quad}$

