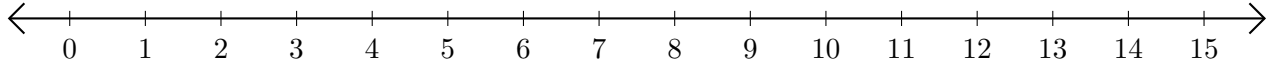


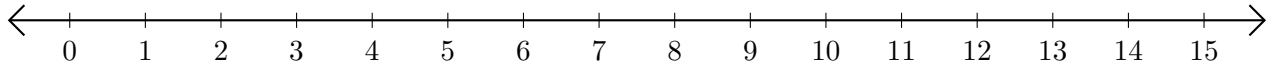
## Opérations sur Une Droite Graduée (B)

Utilisez la droite graduée pour calculer chaque somme ou différence.

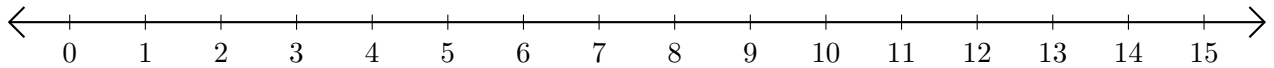
1.  $14 + 1 = \underline{\quad}$



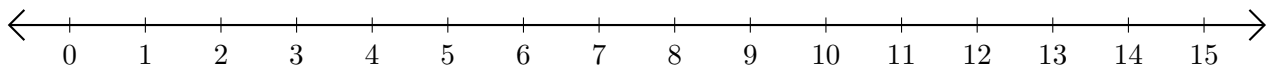
2.  $14 - 13 = \underline{\quad}$



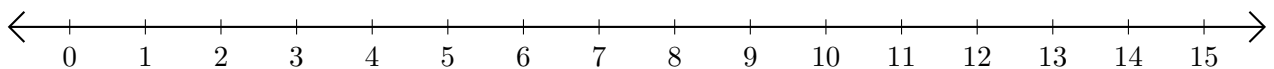
3.  $11 + 1 = \underline{\quad}$



4.  $14 - 2 = \underline{\quad}$



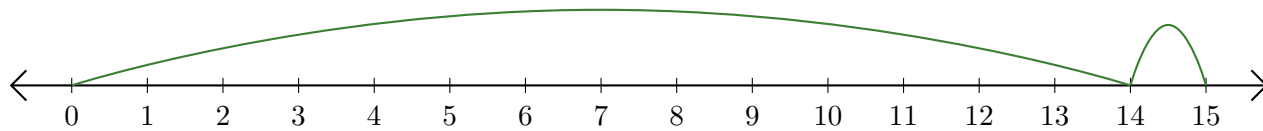
5.  $6 - 1 = \underline{\quad}$



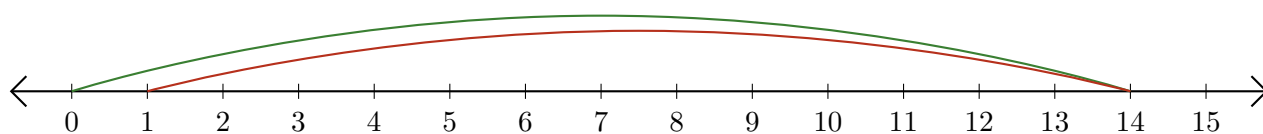
# Opérations sur Une Droite Graduée (B) Réponses

Utilisez la droite graduée pour calculer chaque somme ou différence.

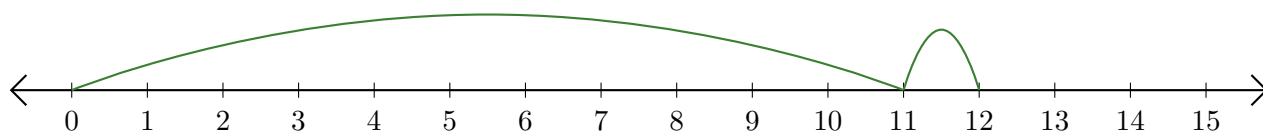
1.  $14 + 1 = \underline{15}$



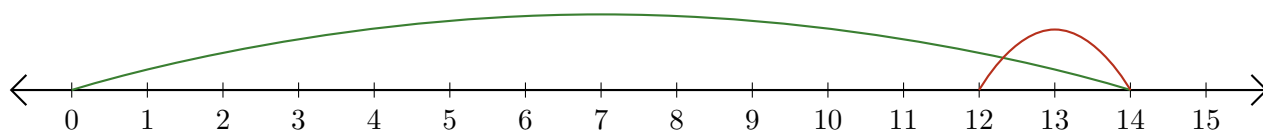
2.  $14 - 13 = \underline{1}$



3.  $11 + 1 = \underline{12}$



4.  $14 - 2 = \underline{12}$



5.  $6 - 1 = \underline{5}$

