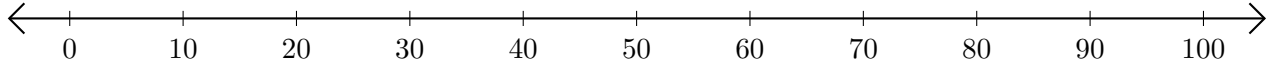


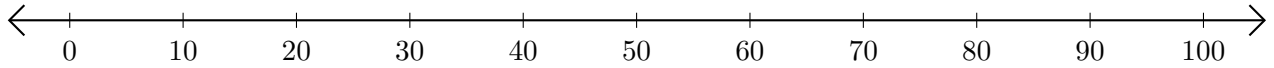
Opérations sur Une Droite Graduée (G)

Utilisez la droite graduée pour calculer chaque somme ou différence.

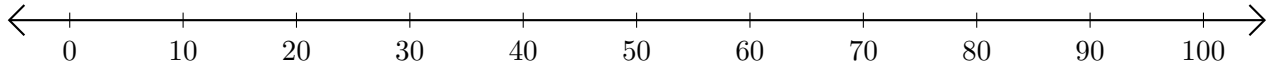
1. $40 + 10 = \underline{\quad}$



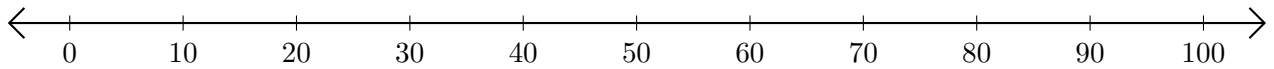
2. $100 - 80 = \underline{\quad}$



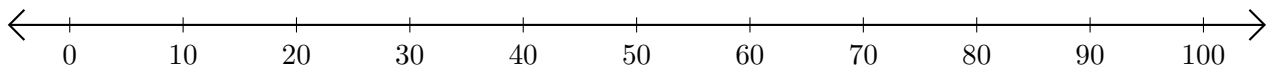
3. $60 + 20 = \underline{\quad}$



4. $20 - 10 = \underline{\quad}$



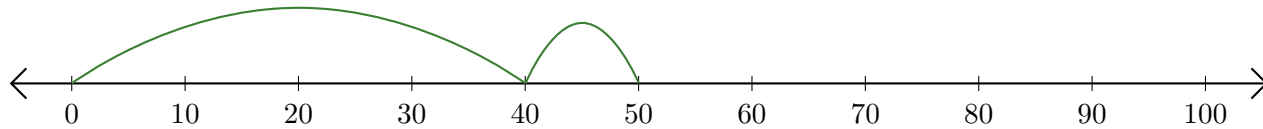
5. $50 - 30 = \underline{\quad}$



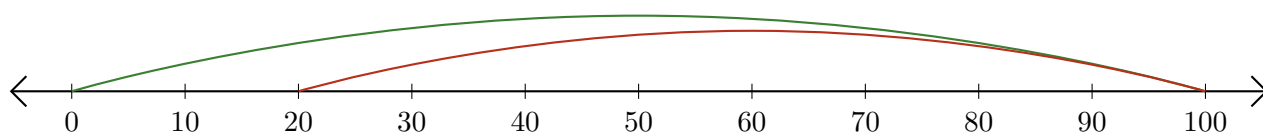
Opérations sur Une Droite Graduée (G) Réponses

Utilisez la droite graduée pour calculer chaque somme ou différence.

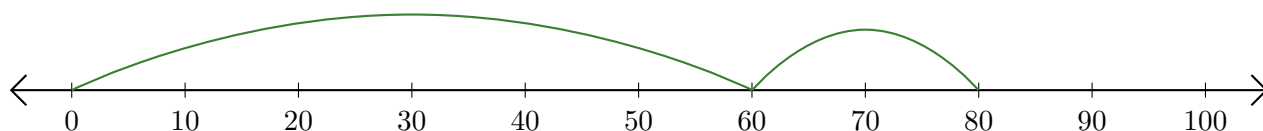
1. $40 + 10 = \underline{50}$



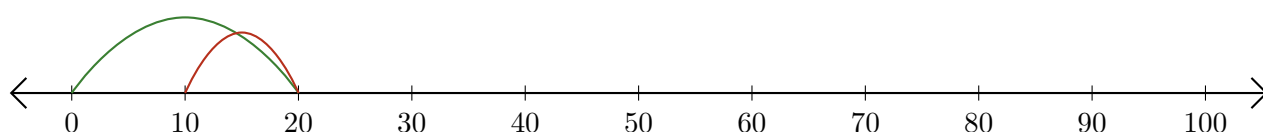
2. $100 - 80 = \underline{20}$



3. $60 + 20 = \underline{80}$



4. $20 - 10 = \underline{10}$



5. $50 - 30 = \underline{20}$

