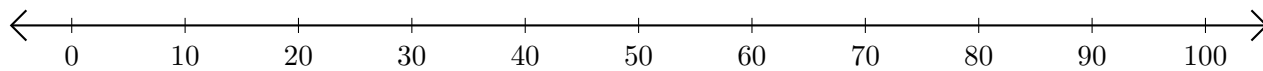


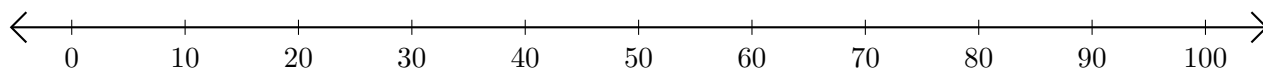
Opérations sur Une Droite Graduée (E)

Utilisez la droite graduée pour calculer chaque somme ou différence.

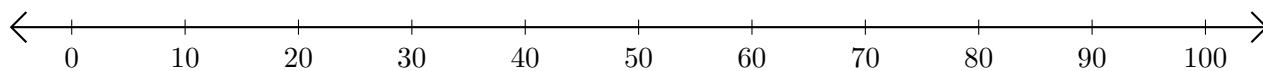
1. $70 + 20 = \underline{\quad}$



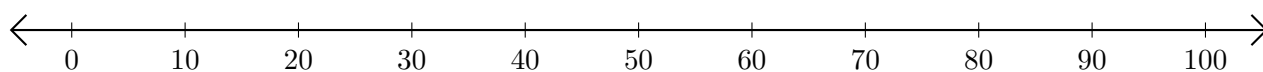
2. $80 - 20 = \underline{\quad}$



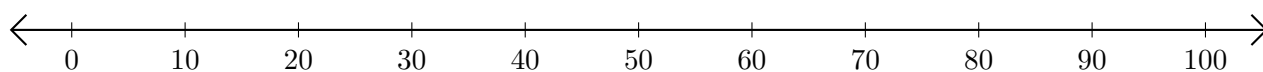
3. $30 + 50 = \underline{\quad}$



4. $100 - 40 = \underline{\quad}$



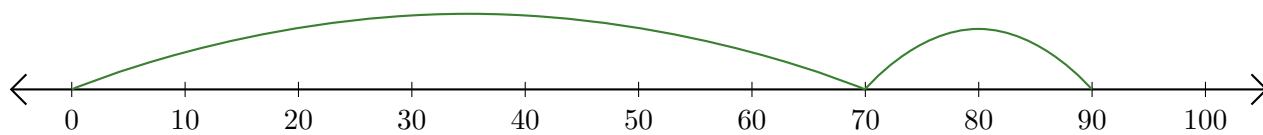
5. $50 + 40 = \underline{\quad}$



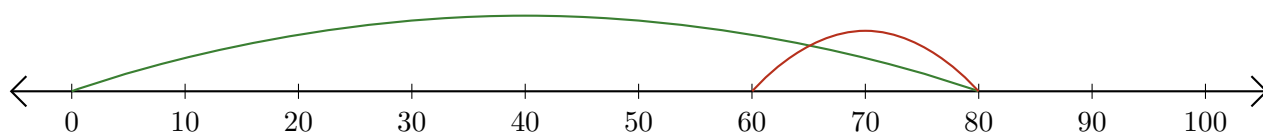
Opérations sur Une Droite Graduée (E) Réponses

Utilisez la droite graduée pour calculer chaque somme ou différence.

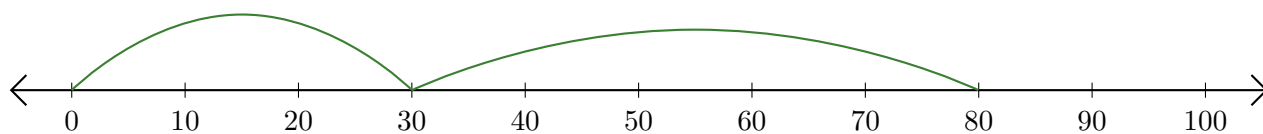
1. $70 + 20 = \underline{90}$



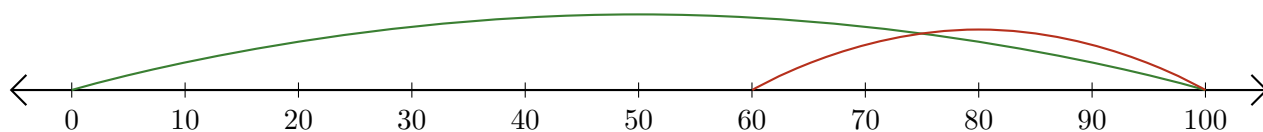
2. $80 - 20 = \underline{60}$



3. $30 + 50 = \underline{80}$



4. $100 - 40 = \underline{60}$



5. $50 + 40 = \underline{90}$

