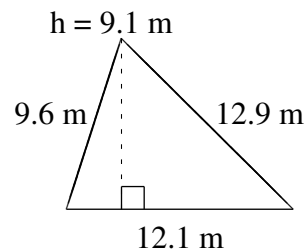
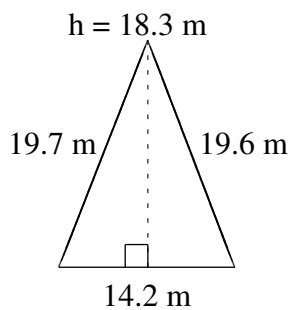
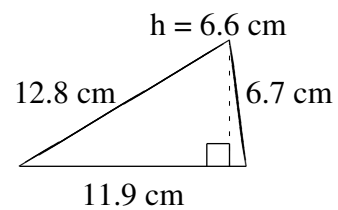
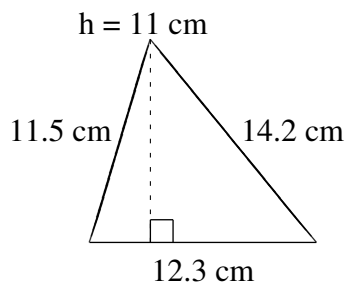
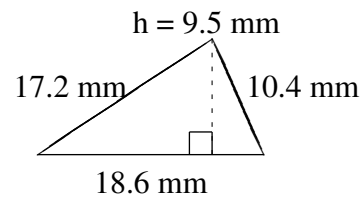
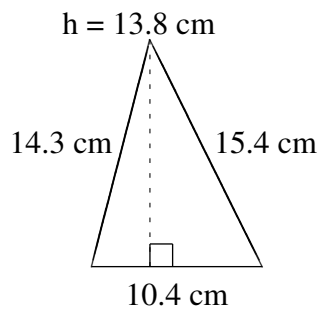


## Aire et Périmètre de Triangles (A)

Trouvez l'aire et le périmètre de chaque triangle.



# Aire et Périmètre de Triangles (A) Solutions

Trouvez l'aire et le périmètre de chaque triangle.

