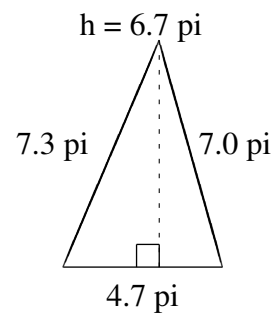
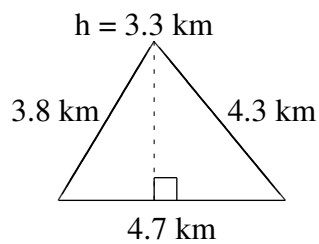
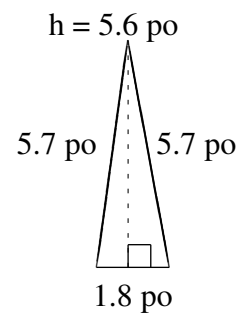
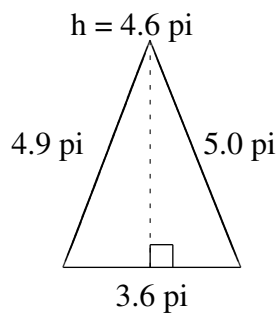
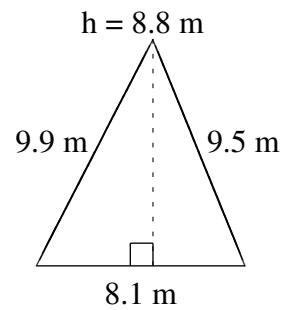
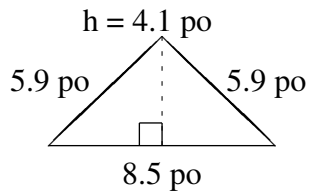


Aire et Périmètre de Triangles (A)

Trouvez l'aire et le périmètre de chaque triangle.



Aire et Périmètre de Triangles (A) Solutions

Trouvez l'aire et le périmètre de chaque triangle.

