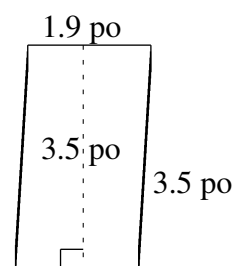
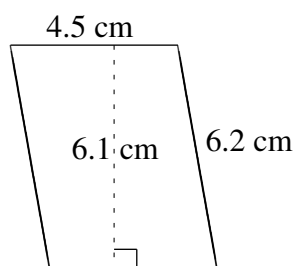
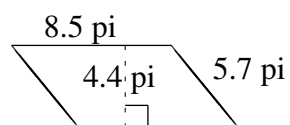
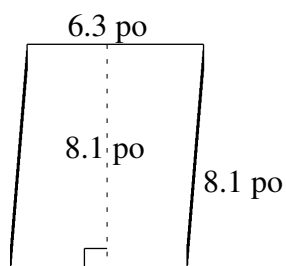
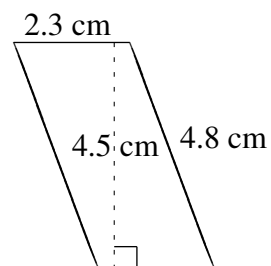
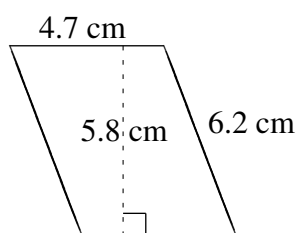


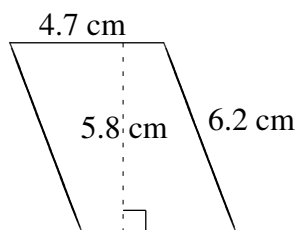
Aire et Périmètre de Parallélogrammes (G)

Trouvez l'aire et le périmètre de chaque parallélogramme.

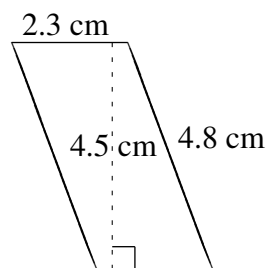


Aire et Périmètre de Parallélogrammes (G) Solutions

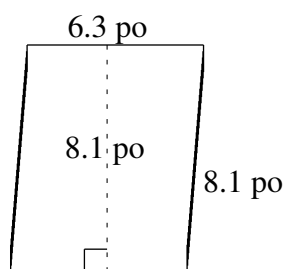
Trouvez l'aire et le périmètre de chaque parallélogramme.



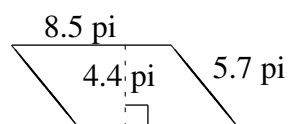
$$A = 27.26 \text{ cm}^2$$
$$P = 21.8 \text{ cm}$$



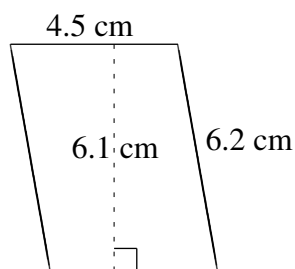
$$A = 10.35 \text{ cm}^2$$
$$P = 14.2 \text{ cm}$$



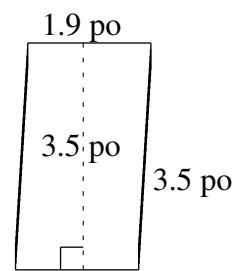
$$A = 51.03 \text{ po}^2$$
$$P = 28.8 \text{ po}$$



$$A = 37.40 \text{ pi}^2$$
$$P = 28.4 \text{ pi}$$



$$A = 27.45 \text{ cm}^2$$
$$P = 21.4 \text{ cm}$$



$$A = 6.65 \text{ po}^2$$
$$P = 10.8 \text{ po}$$