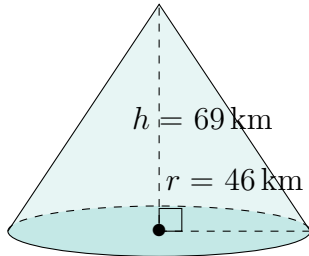


## Aire et Volume d'un Cône (B)

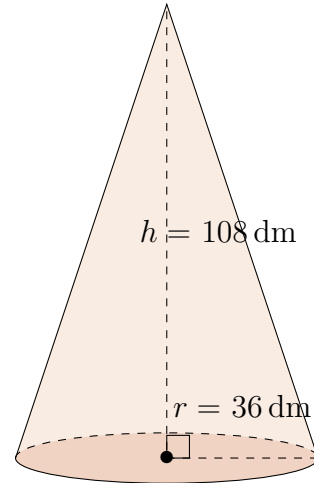
Calculez l'aire et le volume de chaque cône.

$$\text{Aire} = \pi r(r + \sqrt{h^2 + r^2}) \quad \text{Volume} = \pi r^2 \frac{h}{3}$$

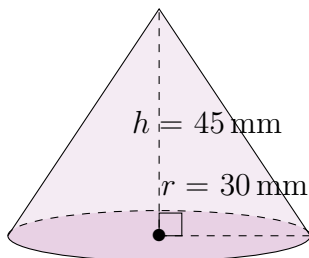
1.



2.



3.



4.

