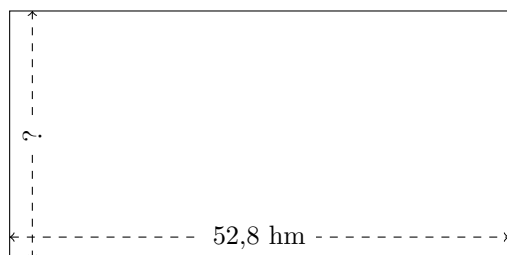


Mesure d'un Rectangle (D)


Calculez les mesures manquantes pour chaque rectangle.

1.




$$P = 158,24 \text{ km}$$
$$A = ?$$

2.




$$P = 18,06 \text{ dam}$$
$$A = ?$$

3.




$$P = 102,62 \text{ dam}$$
$$A = ?$$

4.



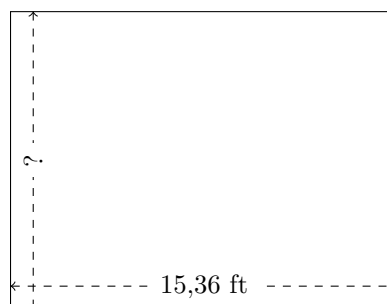
$$P = 76 \text{ km}$$
$$A = ?$$

5.



$$P = 54,24 \text{ mm}$$
$$A = ?$$

6.

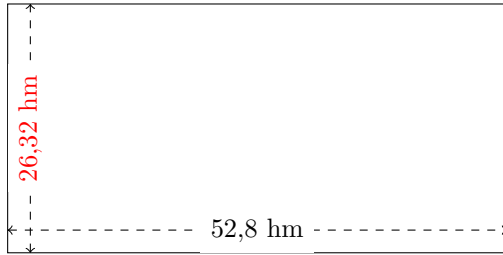


$$P = 54,3 \text{ ft}$$
$$A = ?$$

Mesure d'un Rectangle (D) Réponses

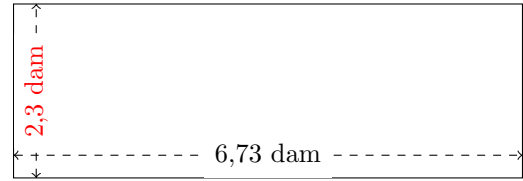
Calculez les mesures manquantes pour chaque rectangle.

1.



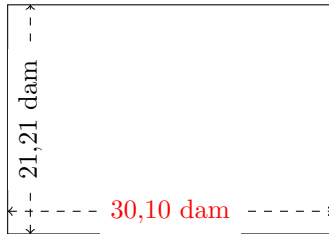
$$P = 158,24 \text{ hm}$$
$$A = 1389,696 \text{ hm}^2$$

2.



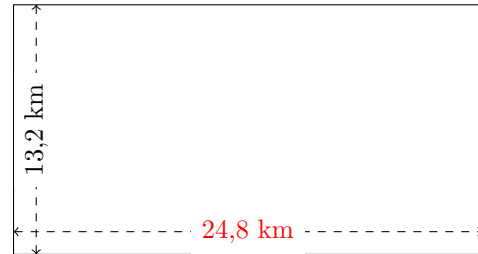
$$P = 18,06 \text{ dam}$$
$$A = 15,479 \text{ dam}^2$$

3.



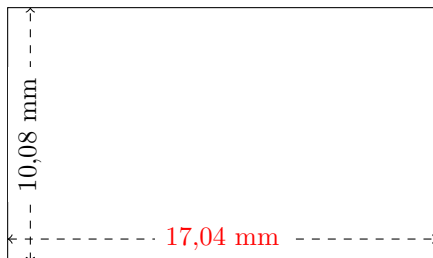
$$P = 102,62 \text{ dam}$$
$$A = 638,421 \text{ dam}^2$$

4.



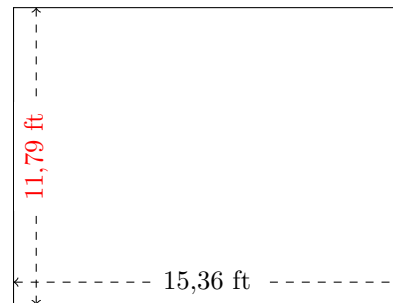
$$P = 76 \text{ km}$$
$$A = 327,36 \text{ km}^2$$

5.



$$P = 54,24 \text{ mm}$$
$$A = 171,7632 \text{ mm}^2$$

6.



$$P = 54,3 \text{ ft}$$
$$A = 181,0944 \text{ ft}^2$$