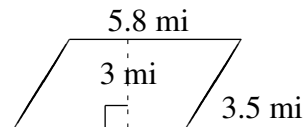
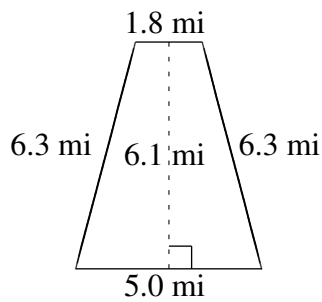
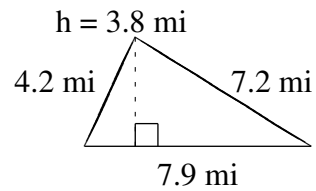
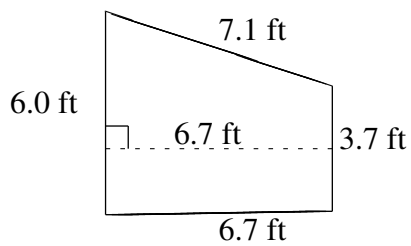
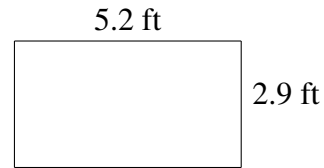
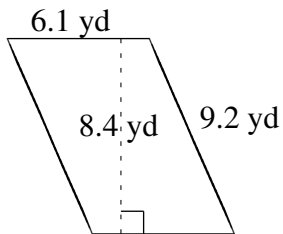


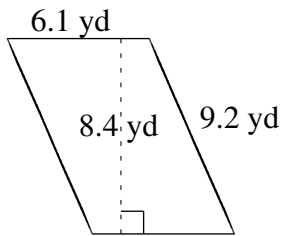
# Aire et Périmètre de Polygones (A)

Trouvez l'aire et le périmètre de chaque polygone.

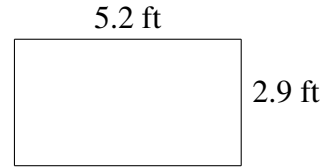


# Aire et Périmètre de Polygones (A) Solutions

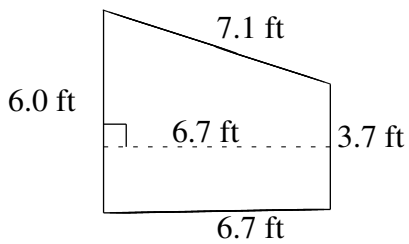
Trouvez l'aire et le périmètre de chaque polygone.



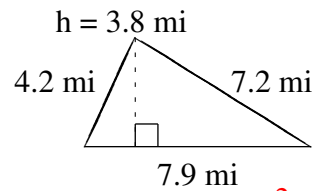
$$A = 51.24 \text{ yd}^2$$
$$P = 30.6 \text{ yd}$$



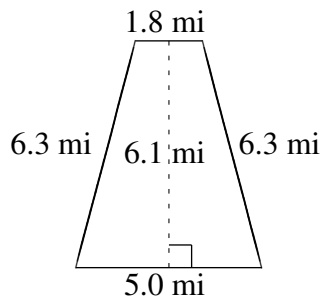
$$A = 15.08 \text{ ft}^2$$
$$P = 16.2 \text{ ft}$$



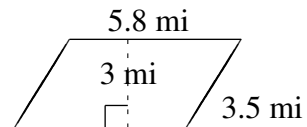
$$A = 32.495 \text{ ft}^2$$
$$P = 23.5 \text{ ft}$$



$$A = 15.01 \text{ mi}^2$$
$$P = 19.3 \text{ mi}$$



$$A = 20.74 \text{ mi}^2$$
$$P = 19.4 \text{ mi}$$



$$A = 17.4 \text{ mi}^2$$
$$P = 18.6 \text{ mi}$$