


Chiffres Fondus Pour tous les goûts (A)

Nom: _____


Date: _____

Retrouve les chiffres qui ont fondu à la chaleur du soleil.


1.
$$\begin{array}{r} \square 0 \square 7 \\ - 33\square \\ \hline \square 87 \end{array}$$




2.
$$\begin{array}{r} 4 \\ 9 \overline{) 3\square} \end{array}$$




3.
$$\begin{array}{r} 7\square 5 \\ + 492 \\ \hline \square\square 7\square \end{array}$$




4.
$$\begin{array}{r} \square\square\square \\ + 949 \\ \hline \square 745 \end{array}$$




5.
$$\begin{array}{r} \square\square\square \\ - 166 \\ \hline 310 \end{array}$$




6.
$$\begin{array}{r} 19\square \\ + \square 66 \\ \hline 4\square 6 \end{array}$$




7.
$$\begin{array}{r} \square \\ 6 \overline{) 24} \end{array}$$




8.
$$\begin{array}{r} \square \\ \times 9 \\ \hline 36 \end{array}$$




9.
$$\begin{array}{r} 5 \\ 2 \overline{) 1\square} \end{array}$$




10.
$$\begin{array}{r} \square\square\square\square \\ - 743 \\ \hline 544 \end{array}$$




11.
$$\begin{array}{r} 1\square \\ 11 \overline{) \square 32} \end{array}$$




12.
$$\begin{array}{r} 7 \\ \times 6 \\ \hline 4\square \end{array}$$




13.
$$\begin{array}{r} 7 \\ \times 4 \\ \hline 2\square \end{array}$$




14.
$$\begin{array}{r} \square 92 \\ + 6\square\square \\ \hline \square 648 \end{array}$$




15.
$$\begin{array}{r} \square\square 0\square \\ - 671 \\ \hline 3\square 9 \end{array}$$




16.
$$\begin{array}{r} \square\square 4 \\ - 176 \\ \hline 6\square \end{array}$$




17.
$$\begin{array}{r} \square \\ \times 11 \\ \hline 88 \end{array}$$




18.
$$\begin{array}{r} 8 \\ 4 \overline{) 3\square} \end{array}$$



19.
$$\begin{array}{r} \square\square 8 \\ + 44\square \\ \hline 941 \end{array}$$



20.
$$\begin{array}{r} 11 \\ \times 12 \\ \hline \square 3\square \end{array}$$




Chiffres Fondus Pour tous les goûts (A) Réponses

Nom: _____


Date: _____

Retrouve les chiffres qui ont fondu à la chaleur du soleil.


1.
$$\begin{array}{r} 1017 \\ - 330 \\ \hline 687 \end{array}$$




2.
$$\begin{array}{r} 4 \\ 9 \overline{) 36} \end{array}$$




3.
$$\begin{array}{r} 785 \\ + 492 \\ \hline 1277 \end{array}$$




4.
$$\begin{array}{r} 796 \\ + 949 \\ \hline 1745 \end{array}$$




5.
$$\begin{array}{r} 476 \\ - 166 \\ \hline 310 \end{array}$$




6.
$$\begin{array}{r} 190 \\ + 266 \\ \hline 456 \end{array}$$




7.
$$\begin{array}{r} 4 \\ 6 \overline{) 24} \end{array}$$




8.
$$\begin{array}{r} 4 \\ \times 9 \\ \hline 36 \end{array}$$




9.
$$\begin{array}{r} 5 \\ 2 \overline{) 10} \end{array}$$




10.
$$\begin{array}{r} 1287 \\ - 743 \\ \hline 544 \end{array}$$




11.
$$\begin{array}{r} 12 \\ 11 \overline{) 132} \end{array}$$




12.
$$\begin{array}{r} 7 \\ \times 6 \\ \hline 42 \end{array}$$




13.
$$\begin{array}{r} 7 \\ \times 4 \\ \hline 28 \end{array}$$




14.
$$\begin{array}{r} 992 \\ + 656 \\ \hline 1648 \end{array}$$




15.
$$\begin{array}{r} 1000 \\ - 671 \\ \hline 329 \end{array}$$




16.
$$\begin{array}{r} 244 \\ - 176 \\ \hline 68 \end{array}$$




17.
$$\begin{array}{r} 8 \\ \times 11 \\ \hline 88 \end{array}$$



18.
$$\begin{array}{r} 8 \\ 4 \overline{) 32} \end{array}$$



19.
$$\begin{array}{r} 498 \\ + 443 \\ \hline 941 \end{array}$$



20.
$$\begin{array}{r} 11 \\ \times 12 \\ \hline 132 \end{array}$$

