


Chiffres Fondus Multiplication (H)

Nom: _____


Date: _____

Retrouve les chiffres qui ont fondu à la chaleur du soleil.


1.
$$\begin{array}{r} 2 \square \\ \times 11 \\ \hline \square 31 \end{array}$$




2.
$$\begin{array}{r} 16 \\ \times 3 \square \\ \hline \square 92 \end{array}$$




3.
$$\begin{array}{r} 35 \\ \times 79 \\ \hline 2 \square 6 \square \end{array}$$




4.
$$\begin{array}{r} 31 \\ \times 47 \\ \hline 1 \square 5 \square \end{array}$$




5.
$$\begin{array}{r} 8 \square \\ \times 56 \\ \hline 4 \square 84 \end{array}$$




6.
$$\begin{array}{r} 78 \\ \times 5 \square \\ \hline 4 \square 46 \end{array}$$




7.
$$\begin{array}{r} 2 \square \\ \times 22 \\ \hline \square 72 \end{array}$$




8.
$$\begin{array}{r} 10 \\ \times 21 \\ \hline \square 1 \square \end{array}$$




9.
$$\begin{array}{r} 3 \square \\ \times 19 \\ \hline \square 08 \end{array}$$




10.
$$\begin{array}{r} 19 \\ \times 4 \square \\ \hline \square 60 \end{array}$$




11.
$$\begin{array}{r} 23 \\ \times 73 \\ \hline 1 \square 7 \square \end{array}$$




12.
$$\begin{array}{r} 7 \square \\ \times 66 \\ \hline 4 \square 84 \end{array}$$




13.
$$\begin{array}{r} 51 \\ \times 57 \\ \hline 2 \square 0 \square \end{array}$$




14.
$$\begin{array}{r} 14 \\ \times 61 \\ \hline \square 5 \square \end{array}$$




15.
$$\begin{array}{r} 48 \\ \times 19 \\ \hline \square 1 \square \end{array}$$




16.
$$\begin{array}{r} 7 \square \\ \times 25 \\ \hline 1 \square 25 \end{array}$$




17.
$$\begin{array}{r} 21 \\ \times 11 \\ \hline \square 3 \square \end{array}$$




18.
$$\begin{array}{r} 59 \\ \times 21 \\ \hline 1 \square 3 \square \end{array}$$



19.
$$\begin{array}{r} 59 \\ \times 45 \\ \hline 2 \square 5 \square \end{array}$$



20.
$$\begin{array}{r} 82 \\ \times 37 \\ \hline 3 \square 3 \square \end{array}$$




Chiffres Fondus Multiplication (H) Réponses

Nom: _____


Date: _____

Retrouve les chiffres qui ont fondu à la chaleur du soleil.


1.
$$\begin{array}{r} 21 \\ \times 11 \\ \hline 231 \end{array}$$




2.
$$\begin{array}{r} 16 \\ \times 37 \\ \hline 592 \end{array}$$




3.
$$\begin{array}{r} 35 \\ \times 79 \\ \hline 2765 \end{array}$$




4.
$$\begin{array}{r} 31 \\ \times 47 \\ \hline 1457 \end{array}$$




5.
$$\begin{array}{r} 89 \\ \times 56 \\ \hline 4984 \end{array}$$




6.
$$\begin{array}{r} 78 \\ \times 57 \\ \hline 4446 \end{array}$$




7.
$$\begin{array}{r} 26 \\ \times 22 \\ \hline 572 \end{array}$$




8.
$$\begin{array}{r} 10 \\ \times 21 \\ \hline 210 \end{array}$$




9.
$$\begin{array}{r} 32 \\ \times 19 \\ \hline 608 \end{array}$$




10.
$$\begin{array}{r} 19 \\ \times 40 \\ \hline 760 \end{array}$$




11.
$$\begin{array}{r} 23 \\ \times 73 \\ \hline 1679 \end{array}$$




12.
$$\begin{array}{r} 74 \\ \times 66 \\ \hline 4884 \end{array}$$




13.
$$\begin{array}{r} 51 \\ \times 57 \\ \hline 2907 \end{array}$$




14.
$$\begin{array}{r} 14 \\ \times 61 \\ \hline 854 \end{array}$$




15.
$$\begin{array}{r} 48 \\ \times 19 \\ \hline 912 \end{array}$$




16.
$$\begin{array}{r} 73 \\ \times 25 \\ \hline 1825 \end{array}$$




17.
$$\begin{array}{r} 21 \\ \times 11 \\ \hline 231 \end{array}$$



18.
$$\begin{array}{r} 59 \\ \times 21 \\ \hline 1239 \end{array}$$



19.
$$\begin{array}{r} 59 \\ \times 45 \\ \hline 2655 \end{array}$$



20.
$$\begin{array}{r} 82 \\ \times 37 \\ \hline 3034 \end{array}$$

