


Chiffres Fondus Multiplication (F)

Nom: _____


Date: _____

Retrouve les chiffres qui ont fondu à la chaleur du soleil.


1.
$$\begin{array}{r} 4 \square \\ \times 75 \\ \hline 3 \square 75 \end{array}$$




2.
$$\begin{array}{r} 20 \\ \times 56 \\ \hline 1 \square 2 \square \end{array}$$




3.
$$\begin{array}{r} 75 \\ \times 71 \\ \hline 5 \square 2 \square \end{array}$$




4.
$$\begin{array}{r} 17 \\ \times 9 \square \\ \hline 1 \square 64 \end{array}$$




5.
$$\begin{array}{r} 68 \\ \times 1 \square \\ \hline \square 16 \end{array}$$




6.
$$\begin{array}{r} 9 \square \\ \times 15 \\ \hline 1 \square 95 \end{array}$$




7.
$$\begin{array}{r} 9 \square \\ \times 44 \\ \hline 4 \square 04 \end{array}$$




8.
$$\begin{array}{r} 20 \\ \times 9 \square \\ \hline 1 \square 80 \end{array}$$




9.
$$\begin{array}{r} 45 \\ \times 4 \square \\ \hline 2 \square 05 \end{array}$$




10.
$$\begin{array}{r} 8 \square \\ \times 65 \\ \hline 5 \square 90 \end{array}$$




11.
$$\begin{array}{r} 4 \square \\ \times 15 \\ \hline \square 20 \end{array}$$




12.
$$\begin{array}{r} 46 \\ \times 85 \\ \hline 3 \square 1 \square \end{array}$$




13.
$$\begin{array}{r} 89 \\ \times 4 \square \\ \hline 4 \square 05 \end{array}$$




14.
$$\begin{array}{r} 40 \\ \times 13 \\ \hline \square 2 \square \end{array}$$




15.
$$\begin{array}{r} 6 \square \\ \times 37 \\ \hline 2 \square 31 \end{array}$$




16.
$$\begin{array}{r} 52 \\ \times 1 \square \\ \hline \square 88 \end{array}$$




17.
$$\begin{array}{r} 83 \\ \times 1 \square \\ \hline 1 \square 62 \end{array}$$




18.
$$\begin{array}{r} 39 \\ \times 7 \square \\ \hline 2 \square 25 \end{array}$$



19.
$$\begin{array}{r} 3 \square \\ \times 91 \\ \hline 2 \square 21 \end{array}$$



20.
$$\begin{array}{r} 5 \square \\ \times 33 \\ \hline 1 \square 15 \end{array}$$




Chiffres Fondus Multiplication (F) Réponses

Nom: _____


Date: _____

Retrouve les chiffres qui ont fondu à la chaleur du soleil.


1.
$$\begin{array}{r} 49 \\ \times 75 \\ \hline 3675 \end{array}$$




2.
$$\begin{array}{r} 20 \\ \times 56 \\ \hline 1120 \end{array}$$




3.
$$\begin{array}{r} 75 \\ \times 71 \\ \hline 5325 \end{array}$$




4.
$$\begin{array}{r} 17 \\ \times 92 \\ \hline 1564 \end{array}$$




5.
$$\begin{array}{r} 68 \\ \times 12 \\ \hline 816 \end{array}$$




6.
$$\begin{array}{r} 93 \\ \times 15 \\ \hline 1395 \end{array}$$




7.
$$\begin{array}{r} 91 \\ \times 44 \\ \hline 4004 \end{array}$$




8.
$$\begin{array}{r} 20 \\ \times 99 \\ \hline 1980 \end{array}$$




9.
$$\begin{array}{r} 45 \\ \times 49 \\ \hline 2205 \end{array}$$




10.
$$\begin{array}{r} 86 \\ \times 65 \\ \hline 5590 \end{array}$$




11.
$$\begin{array}{r} 48 \\ \times 15 \\ \hline 720 \end{array}$$




12.
$$\begin{array}{r} 46 \\ \times 85 \\ \hline 3910 \end{array}$$




13.
$$\begin{array}{r} 89 \\ \times 45 \\ \hline 4005 \end{array}$$




14.
$$\begin{array}{r} 40 \\ \times 13 \\ \hline 520 \end{array}$$




15.
$$\begin{array}{r} 63 \\ \times 37 \\ \hline 2331 \end{array}$$




16.
$$\begin{array}{r} 52 \\ \times 19 \\ \hline 988 \end{array}$$




17.
$$\begin{array}{r} 83 \\ \times 14 \\ \hline 1162 \end{array}$$



18.
$$\begin{array}{r} 39 \\ \times 75 \\ \hline 2925 \end{array}$$



19.
$$\begin{array}{r} 31 \\ \times 91 \\ \hline 2821 \end{array}$$



20.
$$\begin{array}{r} 55 \\ \times 33 \\ \hline 1815 \end{array}$$

