


Chiffres Fondus Division (A)

Nom: _____


Date: _____

Retrouve les chiffres qui ont fondu à la chaleur du soleil.


1.
$$\begin{array}{r} 51 \\ 13 \overline{) \square 6 \square} \end{array}$$




2.
$$\begin{array}{r} 22 \\ 51 \overline{) 1 \square 2 \square} \end{array}$$




3.
$$\begin{array}{r} 4 \square \\ 22 \overline{) \square 8 0} \end{array}$$




4.
$$\begin{array}{r} 27 \\ 33 \overline{) \square 9 \square} \end{array}$$




5.
$$\begin{array}{r} 45 \\ 1 \square \overline{) \square 5 0} \end{array}$$




6.
$$\begin{array}{r} 89 \\ 48 \overline{) 4 \square 7 \square} \end{array}$$




7.
$$\begin{array}{r} 3 \square \\ 94 \overline{) 3 \square 7 8} \end{array}$$




8.
$$\begin{array}{r} 72 \\ 1 \square \overline{) 1 \square 6 8} \end{array}$$




9.
$$\begin{array}{r} 92 \\ 6 \square \overline{) 6 \square 7 2} \end{array}$$




10.
$$\begin{array}{r} 68 \\ 4 \square \overline{) 3 \square 6 0} \end{array}$$




11.
$$\begin{array}{r} 77 \\ 4 \square \overline{) 3 \square 3 4} \end{array}$$




12.
$$\begin{array}{r} 6 \square \\ 86 \overline{) 5 \square 1 8} \end{array}$$




13.
$$\begin{array}{r} 68 \\ 2 \square \overline{) 1 \square 6 4} \end{array}$$




14.
$$\begin{array}{r} 73 \\ 45 \overline{) 3 \square 8 \square} \end{array}$$




15.
$$\begin{array}{r} 1 \square \\ 59 \overline{) \square 9 0} \end{array}$$




16.
$$\begin{array}{r} 21 \\ 1 \square \overline{) \square 9 9} \end{array}$$




17.
$$\begin{array}{r} 5 \square \\ 25 \overline{) 1 \square 7 5} \end{array}$$




18.
$$\begin{array}{r} 12 \\ 19 \overline{) \square 2 \square} \end{array}$$



19.
$$\begin{array}{r} 34 \\ 83 \overline{) 2 \square 2 \square} \end{array}$$



20.
$$\begin{array}{r} 72 \\ 5 \square \overline{) 4 \square 0 4} \end{array}$$




Chiffres Fondus Division (A) Réponses

Nom: _____


Date: _____

Retrouve les chiffres qui ont fondu à la chaleur du soleil.


1.
$$\begin{array}{r} 51 \\ 13 \overline{) 663} \end{array}$$




2.
$$\begin{array}{r} 22 \\ 51 \overline{) 1122} \end{array}$$




3.
$$\begin{array}{r} 40 \\ 22 \overline{) 880} \end{array}$$




4.
$$\begin{array}{r} 27 \\ 33 \overline{) 891} \end{array}$$




5.
$$\begin{array}{r} 45 \\ 10 \overline{) 450} \end{array}$$




6.
$$\begin{array}{r} 89 \\ 48 \overline{) 4272} \end{array}$$




7.
$$\begin{array}{r} 37 \\ 94 \overline{) 3478} \end{array}$$




8.
$$\begin{array}{r} 72 \\ 19 \overline{) 1368} \end{array}$$




9.
$$\begin{array}{r} 92 \\ 66 \overline{) 6072} \end{array}$$




10.
$$\begin{array}{r} 68 \\ 45 \overline{) 3060} \end{array}$$




11.
$$\begin{array}{r} 77 \\ 42 \overline{) 3234} \end{array}$$




12.
$$\begin{array}{r} 63 \\ 86 \overline{) 5418} \end{array}$$




13.
$$\begin{array}{r} 68 \\ 23 \overline{) 1564} \end{array}$$




14.
$$\begin{array}{r} 73 \\ 45 \overline{) 3285} \end{array}$$




15.
$$\begin{array}{r} 10 \\ 59 \overline{) 590} \end{array}$$




16.
$$\begin{array}{r} 21 \\ 19 \overline{) 399} \end{array}$$




17.
$$\begin{array}{r} 51 \\ 25 \overline{) 1275} \end{array}$$



18.
$$\begin{array}{r} 12 \\ 19 \overline{) 228} \end{array}$$



19.
$$\begin{array}{r} 34 \\ 83 \overline{) 2822} \end{array}$$



20.
$$\begin{array}{r} 72 \\ 57 \overline{) 4104} \end{array}$$

