


Chiffres Fondus Addition (E)

Nom: _____


Date: _____

Retrouve les chiffres qui ont fondu à la chaleur du soleil.


1.
$$\begin{array}{r} \square 9 \square \\ + 93 \\ \hline 8 \square 4 \end{array}$$




2.
$$\begin{array}{r} \square 9 \square \\ + 932 \\ \hline \square 5 \square 7 \end{array}$$




3.
$$\begin{array}{r} 3 \square 2 \\ + 63 \square \\ \hline \square 95 \end{array}$$




4.
$$\begin{array}{r} 513 \\ + \square 05 \\ \hline \square 1 \square \square \end{array}$$




5.
$$\begin{array}{r} 61 \\ + \square \square 1 \\ \hline 67 \square \end{array}$$




6.
$$\begin{array}{r} \square 1 \square \\ + 798 \\ \hline \square 2 \square 8 \end{array}$$




7.
$$\begin{array}{r} 595 \\ + 1 \square 9 \\ \hline \square 7 \square \end{array}$$




8.
$$\begin{array}{r} \square 38 \\ + 55 \square \\ \hline 6 \square 8 \end{array}$$




9.
$$\begin{array}{r} 1 \square \square \\ + \square 08 \\ \hline 600 \end{array}$$




10.
$$\begin{array}{r} 67 \\ + \square 4 \square \\ \hline \square 0 \square 6 \end{array}$$




11.
$$\begin{array}{r} \square 4 \square \\ + 787 \\ \hline \square 1 \square 6 \end{array}$$




12.
$$\begin{array}{r} \square 6 \square \\ + 505 \\ \hline \square 3 \square 1 \end{array}$$




13.
$$\begin{array}{r} 5 \square 8 \\ + 179 \\ \hline \square 6 \square \end{array}$$




14.
$$\begin{array}{r} 59 \square \\ + 8 \square 8 \\ \hline \square \square 14 \end{array}$$




15.
$$\begin{array}{r} 797 \\ + \square \square 8 \\ \hline \square 31 \square \end{array}$$




16.
$$\begin{array}{r} \square 23 \\ + 179 \\ \hline 8 \square \square \end{array}$$




17.
$$\begin{array}{r} 886 \\ + \square 4 \square \\ \hline \square 8 \square 7 \end{array}$$




18.
$$\begin{array}{r} 986 \\ + \square \square \square \\ \hline \square 626 \end{array}$$



19.
$$\begin{array}{r} 532 \\ + \square \square 6 \\ \hline 77 \square \end{array}$$



20.
$$\begin{array}{r} 5 \square 9 \\ + \square 9 \square \\ \hline \square 190 \end{array}$$




Chiffres Fondus Addition (E) Réponses

Nom: _____


Date: _____

Retrouve les chiffres qui ont fondu à la chaleur du soleil.


1.
$$\begin{array}{r} 791 \\ + 93 \\ \hline 884 \end{array}$$




2.
$$\begin{array}{r} 595 \\ + 932 \\ \hline 1527 \end{array}$$




3.
$$\begin{array}{r} 362 \\ + 633 \\ \hline 995 \end{array}$$




4.
$$\begin{array}{r} 513 \\ + 605 \\ \hline 1118 \end{array}$$




5.
$$\begin{array}{r} 61 \\ + 611 \\ \hline 672 \end{array}$$




6.
$$\begin{array}{r} 410 \\ + 798 \\ \hline 1208 \end{array}$$




7.
$$\begin{array}{r} 595 \\ + 179 \\ \hline 774 \end{array}$$




8.
$$\begin{array}{r} 138 \\ + 550 \\ \hline 688 \end{array}$$




9.
$$\begin{array}{r} 192 \\ + 408 \\ \hline 600 \end{array}$$




10.
$$\begin{array}{r} 67 \\ + 949 \\ \hline 1016 \end{array}$$




11.
$$\begin{array}{r} 349 \\ + 787 \\ \hline 1136 \end{array}$$




12.
$$\begin{array}{r} 866 \\ + 505 \\ \hline 1371 \end{array}$$




13.
$$\begin{array}{r} 588 \\ + 179 \\ \hline 767 \end{array}$$




14.
$$\begin{array}{r} 596 \\ + 818 \\ \hline 1414 \end{array}$$




15.
$$\begin{array}{r} 797 \\ + 518 \\ \hline 1315 \end{array}$$




16.
$$\begin{array}{r} 623 \\ + 179 \\ \hline 802 \end{array}$$




17.
$$\begin{array}{r} 886 \\ + 941 \\ \hline 1827 \end{array}$$



18.
$$\begin{array}{r} 986 \\ + 640 \\ \hline 1626 \end{array}$$



19.
$$\begin{array}{r} 532 \\ + 246 \\ \hline 778 \end{array}$$



20.
$$\begin{array}{r} 599 \\ + 591 \\ \hline 1190 \end{array}$$

