


Chiffres Fondus Addition (A)

Nom: _____


Date: _____

Retrouve les chiffres qui ont fondu à la chaleur du soleil.


1.
$$\begin{array}{r} 522 \\ + 387 \\ \hline \square\square\square \end{array}$$




2.
$$\begin{array}{r} 4\square4 \\ + 85\square \\ \hline \square\square34 \end{array}$$




3.
$$\begin{array}{r} \square3\square \\ + \square0 \\ \hline 281 \end{array}$$




4.
$$\begin{array}{r} 94\square \\ + 4\square3 \\ \hline \square\square15 \end{array}$$




5.
$$\begin{array}{r} \square63 \\ + 1\square\square \\ \hline 549 \end{array}$$




6.
$$\begin{array}{r} 47\square \\ + 292 \\ \hline \square\square2 \end{array}$$




7.
$$\begin{array}{r} 808 \\ + 3\square\square \\ \hline \square\square69 \end{array}$$




8.
$$\begin{array}{r} 625 \\ + 7\square1 \\ \hline \square\square2\square \end{array}$$




9.
$$\begin{array}{r} 4\square5 \\ + \square51 \\ \hline 71\square \end{array}$$




10.
$$\begin{array}{r} 4\square2 \\ + 45 \\ \hline \square0\square \end{array}$$




11.
$$\begin{array}{r} 73\square \\ + \square78 \\ \hline \square1\square8 \end{array}$$




12.
$$\begin{array}{r} 813 \\ + \square9\square \\ \hline \square0\square4 \end{array}$$




13.
$$\begin{array}{r} 46\square \\ + 97 \\ \hline \square\square7 \end{array}$$




14.
$$\begin{array}{r} 416 \\ + 4\square9 \\ \hline \square0\square \end{array}$$




15.
$$\begin{array}{r} 5\square9 \\ + 11\square \\ \hline \square51 \end{array}$$




16.
$$\begin{array}{r} 1\square9 \\ + \square57 \\ \hline 61\square \end{array}$$




17.
$$\begin{array}{r} \square\square1 \\ + 67\square \\ \hline \square598 \end{array}$$




18.
$$\begin{array}{r} 4\square8 \\ + \square60 \\ \hline \square41\square \end{array}$$



19.
$$\begin{array}{r} \square11 \\ + 299 \\ \hline 4\square\square \end{array}$$



20.
$$\begin{array}{r} 82\square \\ + 9\square9 \\ \hline \square\square70 \end{array}$$




Chiffres Fondus Addition (A) Réponses

Nom: _____


Date: _____

Retrouve les chiffres qui ont fondu à la chaleur du soleil.


1.
$$\begin{array}{r} 522 \\ + 387 \\ \hline 909 \end{array}$$




2.
$$\begin{array}{r} 484 \\ + 850 \\ \hline 1334 \end{array}$$




3.
$$\begin{array}{r} 231 \\ + 50 \\ \hline 281 \end{array}$$




4.
$$\begin{array}{r} 942 \\ + 473 \\ \hline 1415 \end{array}$$




5.
$$\begin{array}{r} 363 \\ + 186 \\ \hline 549 \end{array}$$




6.
$$\begin{array}{r} 470 \\ + 292 \\ \hline 762 \end{array}$$




7.
$$\begin{array}{r} 808 \\ + 361 \\ \hline 1169 \end{array}$$




8.
$$\begin{array}{r} 625 \\ + 701 \\ \hline 1326 \end{array}$$




9.
$$\begin{array}{r} 465 \\ + 251 \\ \hline 716 \end{array}$$




10.
$$\begin{array}{r} 462 \\ + 45 \\ \hline 507 \end{array}$$




11.
$$\begin{array}{r} 730 \\ + 378 \\ \hline 1108 \end{array}$$




12.
$$\begin{array}{r} 813 \\ + 191 \\ \hline 1004 \end{array}$$




13.
$$\begin{array}{r} 460 \\ + 97 \\ \hline 557 \end{array}$$




14.
$$\begin{array}{r} 416 \\ + 489 \\ \hline 905 \end{array}$$




15.
$$\begin{array}{r} 539 \\ + 112 \\ \hline 651 \end{array}$$




16.
$$\begin{array}{r} 159 \\ + 457 \\ \hline 616 \end{array}$$




17.
$$\begin{array}{r} 921 \\ + 677 \\ \hline 1598 \end{array}$$



18.
$$\begin{array}{r} 458 \\ + 960 \\ \hline 1418 \end{array}$$



19.
$$\begin{array}{r} 111 \\ + 299 \\ \hline 410 \end{array}$$



20.
$$\begin{array}{r} 821 \\ + 949 \\ \hline 1770 \end{array}$$

