


Chiffres Fondus Addition (G)

Nom: _____


Date: _____

Retrouve les chiffres qui ont fondu à la chaleur du soleil.


1.
$$\begin{array}{r} \square\square\square 6 \\ + 891\square \\ \hline \square 0452 \end{array}$$




2.
$$\begin{array}{r} 25\square\square \\ + \square\square 40 \\ \hline 6846 \end{array}$$




3.
$$\begin{array}{r} \square 344 \\ + 41\square\square \\ \hline 7\square 68 \end{array}$$




4.
$$\begin{array}{r} 495\square \\ + 3\square 71 \\ \hline \square 1\square 2 \end{array}$$




5.
$$\begin{array}{r} 8098 \\ + \square\square\square\square \\ \hline \square 3530 \end{array}$$




6.
$$\begin{array}{r} 6979 \\ + 741\square \\ \hline \square\square\square\square 0 \end{array}$$




7.
$$\begin{array}{r} 2730 \\ + 7\square 49 \\ \hline \square\square 5\square\square \end{array}$$




8.
$$\begin{array}{r} 625\square \\ + 6\square\square 2 \\ \hline \square\square 025 \end{array}$$




9.
$$\begin{array}{r} 6\square 88 \\ + \square 854 \\ \hline 89\square\square \end{array}$$




10.
$$\begin{array}{r} 8\square\square 8 \\ + 5985 \\ \hline \square\square 79\square \end{array}$$




11.
$$\begin{array}{r} 633\square \\ + \square 391 \\ \hline \square 5\square\square 5 \end{array}$$




12.
$$\begin{array}{r} 23\square 5 \\ + 9\square 54 \\ \hline \square\square 36\square \end{array}$$




13.
$$\begin{array}{r} 4\square\square 6 \\ + \square 913 \\ \hline \square 308\square \end{array}$$




14.
$$\begin{array}{r} 9\square 40 \\ + 4842 \\ \hline \square\square 6\square\square \end{array}$$




15.
$$\begin{array}{r} 4\square 8\square \\ + 99\square 4 \\ \hline \square\square 845 \end{array}$$




16.
$$\begin{array}{r} \square 8\square\square \\ + 6850 \\ \hline \square 2\square 94 \end{array}$$




17.
$$\begin{array}{r} \square 744 \\ + 4868 \\ \hline \square 4\square\square\square \end{array}$$




18.
$$\begin{array}{r} 13\square\square \\ + \square 876 \\ \hline 9\square 66 \end{array}$$



19.
$$\begin{array}{r} \square\square\square 2 \\ + 6433 \\ \hline \square 548\square \end{array}$$



20.
$$\begin{array}{r} 590\square \\ + \square\square\square 1 \\ \hline \square 2089 \end{array}$$




Chiffres Fondus Addition (G) Réponses

Nom: _____


Date: _____

Retrouve les chiffres qui ont fondu à la chaleur du soleil.


1.
$$\begin{array}{r} 1536 \\ + 8916 \\ \hline 10452 \end{array}$$




2.
$$\begin{array}{r} 2506 \\ + 4340 \\ \hline 6846 \end{array}$$




3.
$$\begin{array}{r} 3344 \\ + 4124 \\ \hline 7468 \end{array}$$




4.
$$\begin{array}{r} 4951 \\ + 3171 \\ \hline 8122 \end{array}$$




5.
$$\begin{array}{r} 8098 \\ + 5432 \\ \hline 13530 \end{array}$$




6.
$$\begin{array}{r} 6979 \\ + 7411 \\ \hline 14390 \end{array}$$




7.
$$\begin{array}{r} 2730 \\ + 7849 \\ \hline 10579 \end{array}$$




8.
$$\begin{array}{r} 6253 \\ + 6772 \\ \hline 13025 \end{array}$$




9.
$$\begin{array}{r} 6088 \\ + 2854 \\ \hline 8942 \end{array}$$




10.
$$\begin{array}{r} 8808 \\ + 5985 \\ \hline 14793 \end{array}$$




11.
$$\begin{array}{r} 6334 \\ + 9391 \\ \hline 15725 \end{array}$$




12.
$$\begin{array}{r} 2315 \\ + 9054 \\ \hline 11369 \end{array}$$




13.
$$\begin{array}{r} 4176 \\ + 8913 \\ \hline 13089 \end{array}$$




14.
$$\begin{array}{r} 9840 \\ + 4842 \\ \hline 14682 \end{array}$$




15.
$$\begin{array}{r} 4881 \\ + 9964 \\ \hline 14845 \end{array}$$




16.
$$\begin{array}{r} 5844 \\ + 6850 \\ \hline 12694 \end{array}$$




17.
$$\begin{array}{r} 9744 \\ + 4868 \\ \hline 14612 \end{array}$$



18.
$$\begin{array}{r} 1390 \\ + 7876 \\ \hline 9266 \end{array}$$



19.
$$\begin{array}{r} 9052 \\ + 6433 \\ \hline 15485 \end{array}$$



20.
$$\begin{array}{r} 5908 \\ + 6181 \\ \hline 12089 \end{array}$$

