


Chiffres Fondus Addition (A)

Nom: _____


Date: _____

Retrouve les chiffres qui ont fondu à la chaleur du soleil.


1.
$$\begin{array}{r} \square 4 \square \square \\ + 7 \square 5 7 \\ \hline \square 4 3 4 2 \end{array}$$




2.
$$\begin{array}{r} 9 9 7 \square \\ + 9 1 0 6 \\ \hline \square \square \square \square 8 \end{array}$$




3.
$$\begin{array}{r} 8 4 3 2 \\ + 4 \square \square \square \\ \hline \square \square 3 3 5 \end{array}$$




4.
$$\begin{array}{r} 7 \square 9 \square \\ + \square 9 \square 5 \\ \hline \square 3 4 4 8 \end{array}$$




5.
$$\begin{array}{r} 6 \square \square \square \\ + \square 8 5 0 \\ \hline \square 4 9 7 4 \end{array}$$




6.
$$\begin{array}{r} \square \square 7 \square \\ + 3 8 \square 5 \\ \hline 6 1 0 6 \end{array}$$




7.
$$\begin{array}{r} 6 1 5 7 \\ + \square 9 5 \square \\ \hline 8 \square \square 8 \end{array}$$




8.
$$\begin{array}{r} 6 9 5 \square \\ + \square \square 1 2 \\ \hline \square 3 8 \square 5 \end{array}$$




9.
$$\begin{array}{r} \square \square 1 \square \\ + 3 2 2 4 \\ \hline 8 6 \square 7 \end{array}$$




10.
$$\begin{array}{r} 1 9 1 7 \\ + 8 \square \square 1 \\ \hline \square \square 8 9 \square \end{array}$$




11.
$$\begin{array}{r} \square \square \square 2 \\ + 6 1 9 1 \\ \hline 9 7 3 \square \end{array}$$




12.
$$\begin{array}{r} \square \square \square 2 \\ + 9 0 7 1 \\ \hline \square 3 1 7 \square \end{array}$$




13.
$$\begin{array}{r} 4 9 8 7 \\ + \square 2 6 \square \\ \hline 6 \square \square 3 \end{array}$$




14.
$$\begin{array}{r} \square 9 2 4 \\ + 8 2 \square \square \\ \hline \square 2 \square 0 4 \end{array}$$




15.
$$\begin{array}{r} 7 \square 7 5 \\ + \square 1 3 1 \\ \hline \square 0 8 \square \square \end{array}$$




16.
$$\begin{array}{r} \square 0 8 \square \\ + 4 \square 7 5 \\ \hline \square 1 2 \square 8 \end{array}$$




17.
$$\begin{array}{r} \square \square 4 5 \\ + 2 4 \square \square \\ \hline 8 9 0 9 \end{array}$$




18.
$$\begin{array}{r} \square \square 1 4 \\ + 3 5 3 \square \\ \hline 6 5 \square 7 \end{array}$$



19.
$$\begin{array}{r} \square \square \square 0 \\ + 3 3 5 2 \\ \hline \square 1 3 9 \square \end{array}$$



20.
$$\begin{array}{r} 2 \square \square 2 \\ + \square 0 1 3 \\ \hline 9 5 0 \square \end{array}$$




Chiffres Fondus Addition (A) Réponses

Nom: _____


Date: _____

Retrouve les chiffres qui ont fondu à la chaleur du soleil.


1.
$$\begin{array}{r} 6485 \\ + 7857 \\ \hline 14342 \end{array}$$




2.
$$\begin{array}{r} 9972 \\ + 9106 \\ \hline 19078 \end{array}$$




3.
$$\begin{array}{r} 8432 \\ + 4903 \\ \hline 13335 \end{array}$$




4.
$$\begin{array}{r} 7493 \\ + 5955 \\ \hline 13448 \end{array}$$




5.
$$\begin{array}{r} 6124 \\ + 8850 \\ \hline 14974 \end{array}$$




6.
$$\begin{array}{r} 2271 \\ + 3835 \\ \hline 6106 \end{array}$$




7.
$$\begin{array}{r} 6157 \\ + 1951 \\ \hline 8108 \end{array}$$




8.
$$\begin{array}{r} 6953 \\ + 6912 \\ \hline 13865 \end{array}$$




9.
$$\begin{array}{r} 5413 \\ + 3224 \\ \hline 8637 \end{array}$$




10.
$$\begin{array}{r} 1917 \\ + 8981 \\ \hline 10898 \end{array}$$




11.
$$\begin{array}{r} 3542 \\ + 6191 \\ \hline 9733 \end{array}$$




12.
$$\begin{array}{r} 4102 \\ + 9071 \\ \hline 13173 \end{array}$$




13.
$$\begin{array}{r} 4987 \\ + 1266 \\ \hline 6253 \end{array}$$




14.
$$\begin{array}{r} 3924 \\ + 8280 \\ \hline 12204 \end{array}$$




15.
$$\begin{array}{r} 7675 \\ + 3131 \\ \hline 10806 \end{array}$$




16.
$$\begin{array}{r} 7083 \\ + 4175 \\ \hline 11258 \end{array}$$




17.
$$\begin{array}{r} 6445 \\ + 2464 \\ \hline 8909 \end{array}$$



18.
$$\begin{array}{r} 3014 \\ + 3533 \\ \hline 6547 \end{array}$$



19.
$$\begin{array}{r} 8040 \\ + 3352 \\ \hline 11392 \end{array}$$



20.
$$\begin{array}{r} 2492 \\ + 7013 \\ \hline 9505 \end{array}$$

