






À Travers la Forêt Hantée (C)

Trouvez chaque somme pour vous sortir de la forêt hantée.









$$\begin{array}{r} 16 \\ + 94 \\ \hline \end{array}$$


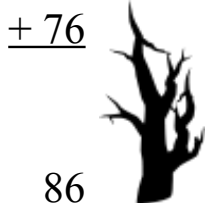
$$\begin{array}{r} 75 \\ + 92 \\ \hline \end{array}$$


$$\begin{array}{r} 82 \\ + 96 \\ \hline \end{array}$$






$$\begin{array}{r} 65 \\ + 70 \\ \hline \end{array}$$



$$\begin{array}{r} 72 \\ + 19 \\ \hline \end{array}$$



$$\begin{array}{r} 75 \\ + 50 \\ \hline \end{array}$$


$$\begin{array}{r} 82 \\ + 96 \\ \hline \end{array}$$






$$\begin{array}{r} 20 \\ + 64 \\ \hline \end{array}$$



$$\begin{array}{r} 70 \\ + 84 \\ \hline \end{array}$$




$$\begin{array}{r} 12 \\ + 76 \\ \hline \end{array}$$


$$\begin{array}{r} 86 \\ + 93 \\ \hline \end{array}$$





$$\begin{array}{r} 85 \\ + 99 \\ \hline \end{array}$$



$$\begin{array}{r} 30 \\ + 57 \\ \hline \end{array}$$



$$\begin{array}{r} 53 \\ + 48 \\ \hline \end{array}$$



$$\begin{array}{r} 86 \\ + 11 \\ \hline \end{array}$$





$$\begin{array}{r} 17 \\ + 10 \\ \hline \end{array}$$



$$\begin{array}{r} 52 \\ + 58 \\ \hline \end{array}$$



$$\begin{array}{r} 87 \\ + 35 \\ \hline \end{array}$$


$$\begin{array}{r} 86 \\ + 11 \\ \hline \end{array}$$







$$\begin{array}{r} 78 \\ + 21 \\ \hline \end{array}$$



$$\begin{array}{r} 83 \\ + 17 \\ \hline \end{array}$$



$$\begin{array}{r} 44 \\ + 82 \\ \hline \end{array}$$


$$\begin{array}{r} 75 \\ + 62 \\ \hline \end{array}$$

$$\begin{array}{r} 11 \\ + 45 \\ \hline \end{array}$$


$$\begin{array}{r} 98 \\ + 75 \\ \hline \end{array}$$






$$\begin{array}{r} 19 \\ + 43 \\ \hline \end{array}$$


$$\begin{array}{r} 33 \\ + 50 \\ \hline \end{array}$$
