

# À Travers la Forêt Hantée (C)

Trouvez chaque somme pour vous sortir de la forêt hantée.

2  
+7

6  
+1

2  
+7

4  
+5

5  
+8

5  
+5

2  
+7

5  
+3

2  
+1

3  
+2

8  
+7

3  
+8

8  
+3

8  
+9

9  
+2

5  
+6

8  
+8

7  
+6

3  
+5

6  
+4

9  
+4

2  
+5





















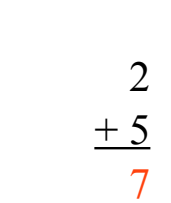

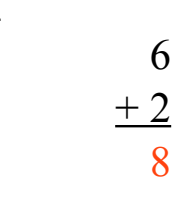







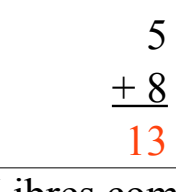
6  
+2

7  
+9

5  
+8

# À Travers la Forêt Hantée (C) Solutions

Trouvez chaque somme pour vous sortir de la forêt hantée.

	$\begin{array}{r} 2 \\ +7 \\ \hline 9 \end{array}$		$\begin{array}{r} 6 \\ +1 \\ \hline 7 \end{array}$		$\begin{array}{r} 2 \\ +7 \\ \hline 9 \end{array}$	
	$\begin{array}{r} 5 \\ +5 \\ \hline 10 \end{array}$		$\begin{array}{r} 4 \\ +5 \\ \hline 9 \end{array}$		$\begin{array}{r} 5 \\ +8 \\ \hline 13 \end{array}$	
	$\begin{array}{r} 2 \\ +1 \\ \hline 3 \end{array}$		$\begin{array}{r} 8 \\ +7 \\ \hline 15 \end{array}$		$\begin{array}{r} 3 \\ +2 \\ \hline 5 \end{array}$	
	$\begin{array}{r} 8 \\ +3 \\ \hline 11 \end{array}$		$\begin{array}{r} 3 \\ +8 \\ \hline 11 \end{array}$		$\begin{array}{r} 5 \\ +6 \\ \hline 11 \end{array}$	
	$\begin{array}{r} 8 \\ +9 \\ \hline 17 \end{array}$		$\begin{array}{r} 9 \\ +2 \\ \hline 11 \end{array}$		$\begin{array}{r} 5 \\ +8 \\ \hline 13 \end{array}$	
	$\begin{array}{r} 7 \\ +6 \\ \hline 13 \end{array}$		$\begin{array}{r} 6 \\ +4 \\ \hline 10 \end{array}$		$\begin{array}{r} 9 \\ +4 \\ \hline 13 \end{array}$	
$\begin{array}{r} 2 \\ +5 \\ \hline 7 \end{array}$		$\begin{array}{r} 3 \\ +5 \\ \hline 8 \end{array}$		$\begin{array}{r} 6 \\ +2 \\ \hline 8 \end{array}$		
	$\begin{array}{r} 7 \\ +9 \\ \hline 16 \end{array}$		$\begin{array}{r} 6 \\ +8 \\ \hline 14 \end{array}$		$\begin{array}{r} 5 \\ +8 \\ \hline 13 \end{array}$	