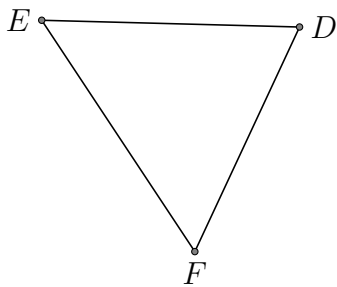


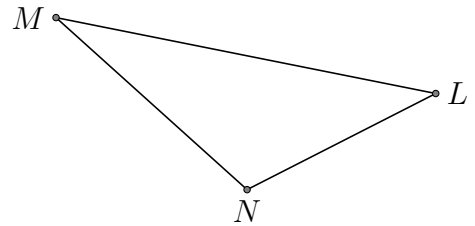
Centres de Triangle (A)

Trouver chaque centre du triangle donné

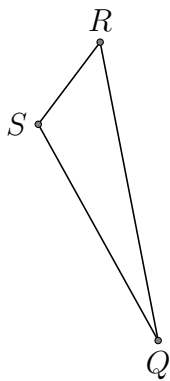
1. - Centre de gravité d'un triangle



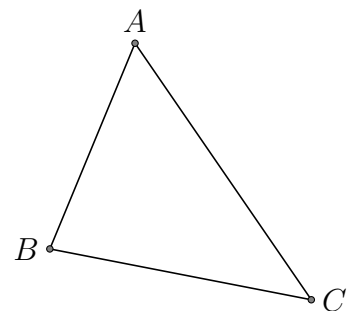
2. - angle inscrit



3. - angle circonscrit



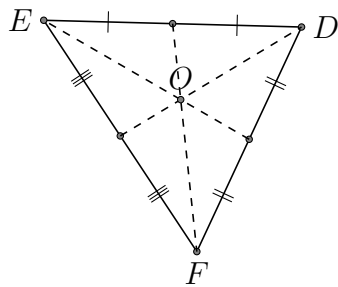
4. - orthocentre



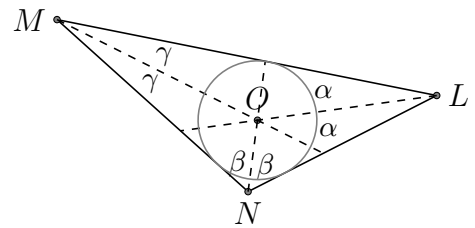
Centres de Triangle (A) Réponses

Trouver chaque centre du triangle donné

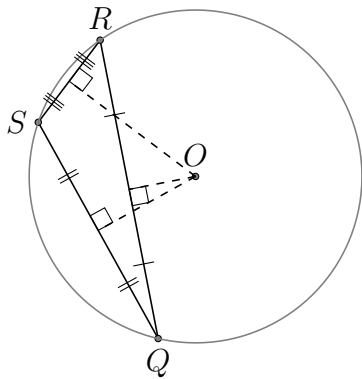
1. - Centre de gravité d'un triangle



2. - angle inscrit



3. - angle circonscrit



4. - orthocentre

