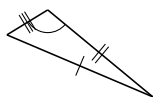
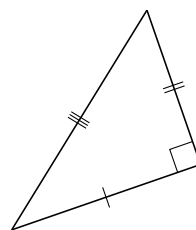


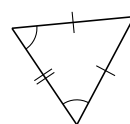
Classification de Triangles (B)

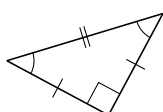
Classifiez chaque triangle à l'aide des mesures d'angles et de côtés.



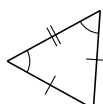


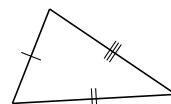


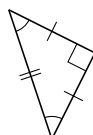


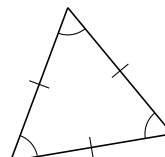






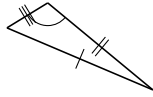




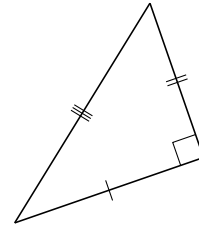


Classification de Triangles (B) Solutions

Classifiez chaque triangle à l'aide des mesures d'angles et de côtés.



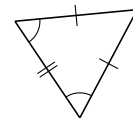
scalène, obtus



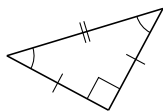
scalène, droit



isocèle, obtus



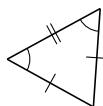
isocèle, aigu



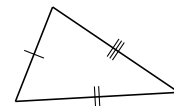
isocèle, droit



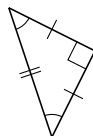
scalène, aigu



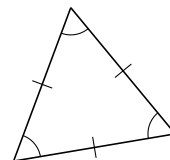
isocèle, aigu



scalène, aigu



isocèle, droit



équilatéral, aigu