
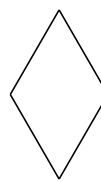


# Classification de Quadrilatères (A)

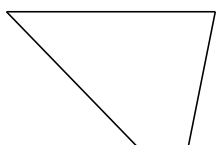
Identifiez chaque quadrilatère.




\_\_\_\_\_




\_\_\_\_\_



\_\_\_\_\_



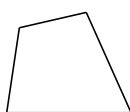
\_\_\_\_\_



\_\_\_\_\_



\_\_\_\_\_



\_\_\_\_\_



\_\_\_\_\_




\_\_\_\_\_



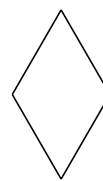
\_\_\_\_\_

# Classification de Quadrilatères (A) Solutions

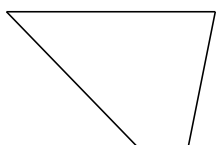
Identifiez chaque quadrilatère.




parallélogramme



losange



trapèze



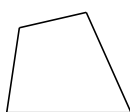
carré



rectangle



losange



quadrilatère



rectangle



rectangle



rectangle