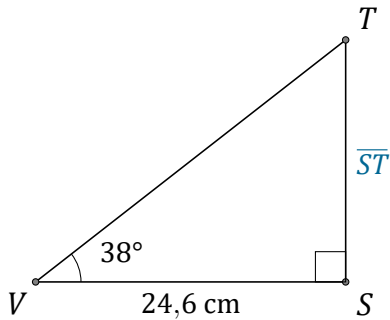


Rapports Trigonométriques (H)

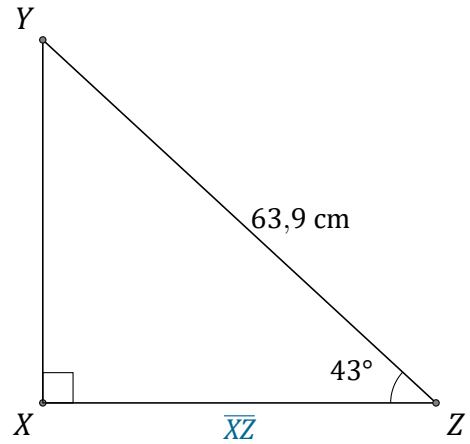
Nom: _____

Date: _____

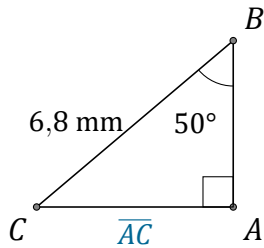
Trouvez la mesure d'un côté avec les rapports trigonométriques.



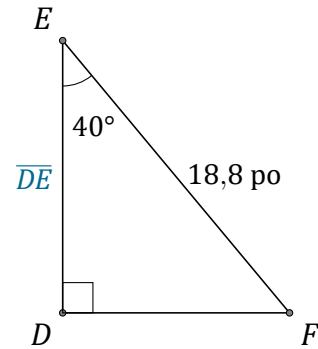
$$\overline{ST} = \underline{\hspace{2cm}}$$



$$\overline{XZ} = \underline{\hspace{2cm}}$$



$$\overline{AC} = \underline{\hspace{2cm}}$$



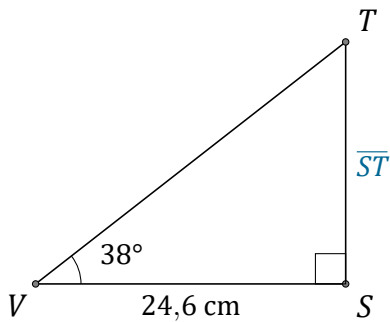
$$\overline{DE} = \underline{\hspace{2cm}}$$

Rapports Trigonométriques (H) Réponses

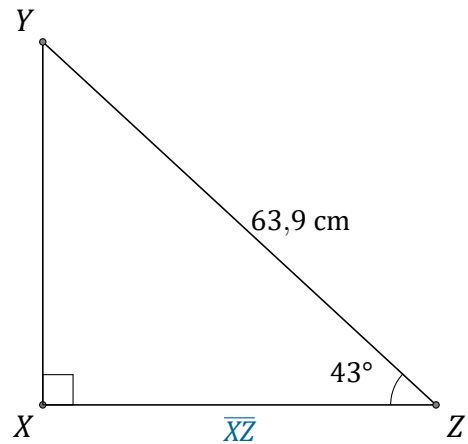
Nom: _____

Date: _____

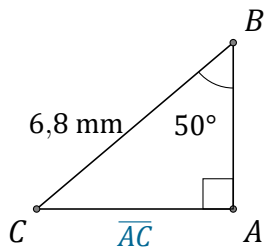
Trouvez la mesure d'un côté avec les rapports trigonométriques.



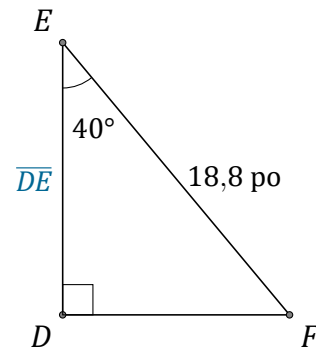
$$\overline{ST} = \underline{19,2 \text{ cm}}$$



$$\overline{XZ} = \underline{46,7 \text{ cm}}$$



$$\overline{AC} = \underline{5,2 \text{ mm}}$$



$$\overline{DE} = \underline{14,4 \text{ po}}$$