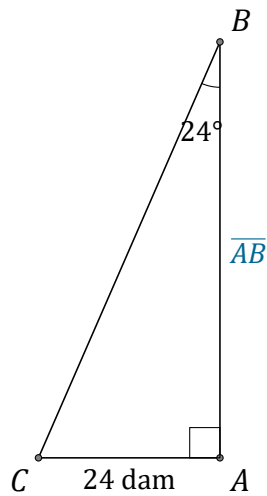


# Rapports Trigonométriques (B)

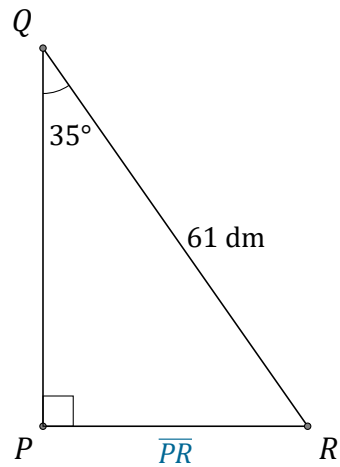
Nom: \_\_\_\_\_

Date: \_\_\_\_\_

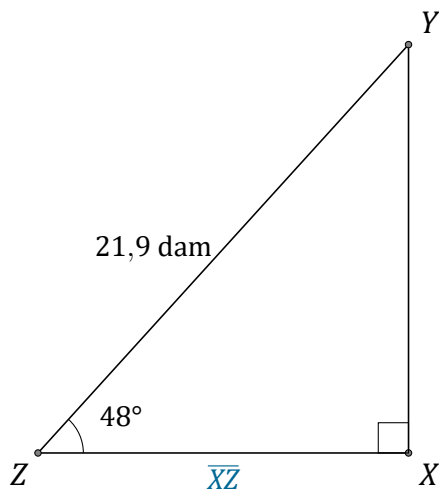
Trouvez la mesure d'un côté avec les rapports trigonométriques.



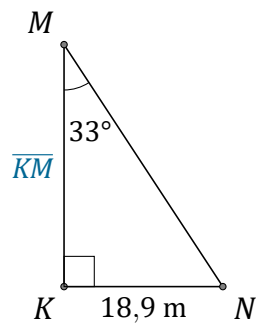
$$\overline{AB} = \underline{\hspace{2cm}}$$



$$\overline{PR} = \underline{\hspace{2cm}}$$



$$\overline{XZ} = \underline{\hspace{2cm}}$$



$$\overline{KM} = \underline{\hspace{2cm}}$$