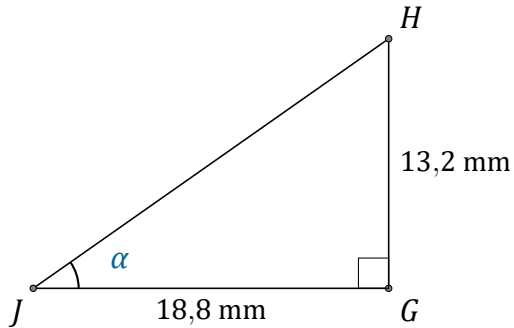


# Rapport Trigonométrique Tan (G)

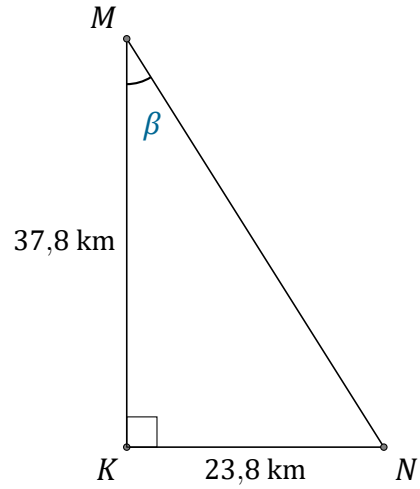
Nom: \_\_\_\_\_

Date: \_\_\_\_\_

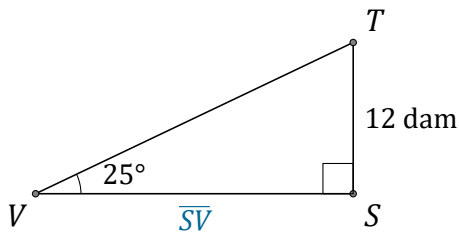
Trouvez la mesure d'un angle ou d'un côté avec le rapport trigonométrique tangente:  $\tan(\alpha) = \frac{O}{A}$



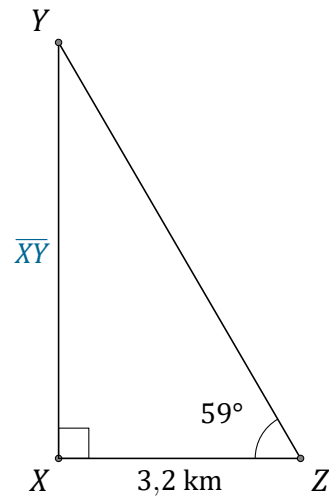
$$\alpha = \angle GJH = \underline{\hspace{2cm}}$$



$$\beta = \angle KMN = \underline{\hspace{2cm}}$$



$$\overline{SV} = \underline{\hspace{2cm}}$$



$$\overline{XY} = \underline{\hspace{2cm}}$$