





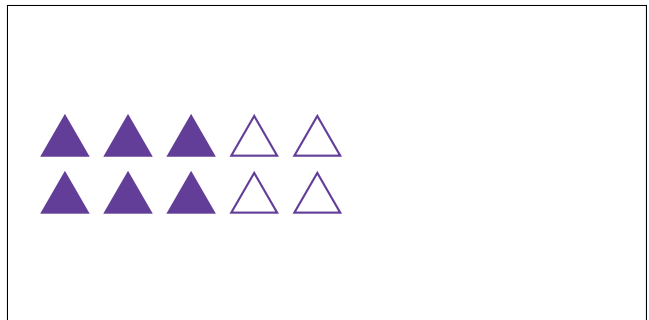
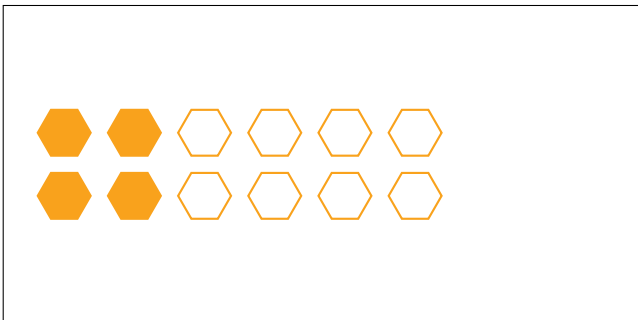
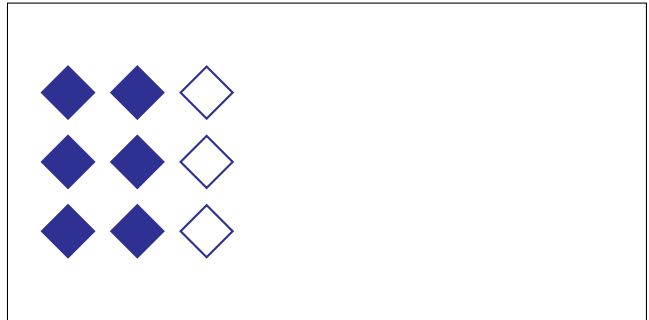
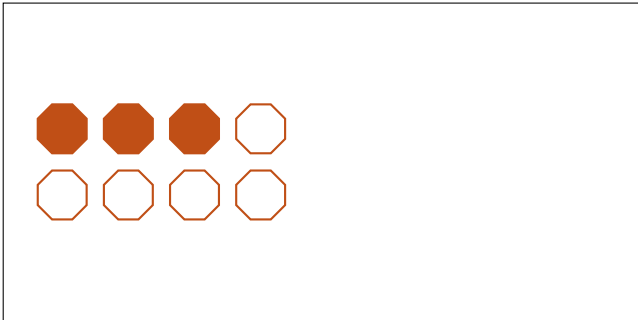
# Modèles d'un Ensemble (F)




Dans cet ensemble  
il y a 16 figures  
et 2 sont coloriées.

$$\frac{2 \text{ figures coloriées}}{16 \text{ figures dans cet ensemble}} = \frac{2}{16} = \frac{1}{8}$$

Écrivez une fraction pour chacun des modèles suivants.



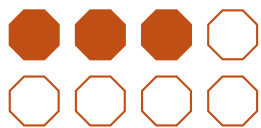
# Modèles d'un Ensemble (F) Réponses




Dans cet ensemble  
il y a 16 figures  
et 2 sont coloriées.

$$\frac{2 \text{ figures coloriées}}{16 \text{ figures dans cet ensemble}} = \frac{2}{16} = \frac{1}{8}$$

Écrivez une fraction pour chacun des modèles suivants.



$$\frac{3}{8}$$



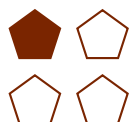
$$\frac{6}{9} = \frac{2}{3}$$



$$\frac{4}{12} = \frac{1}{3}$$



$$\frac{6}{10} = \frac{3}{5}$$



$$\frac{1}{4}$$



$$\frac{1}{2}$$



$$\frac{2}{5}$$



$$\frac{15}{18} = \frac{5}{6}$$