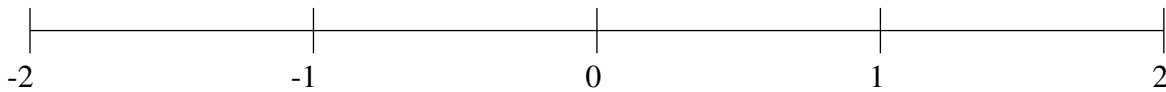


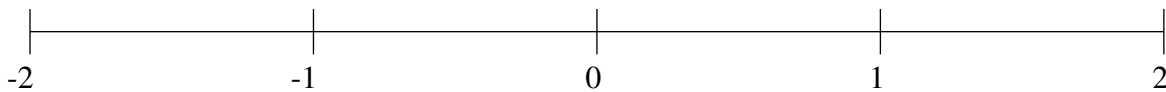
Classification de Fractions (A)

À l'aide des droites numériques, classifiez chaque série de fractions ci-dessous en ordre croissant.

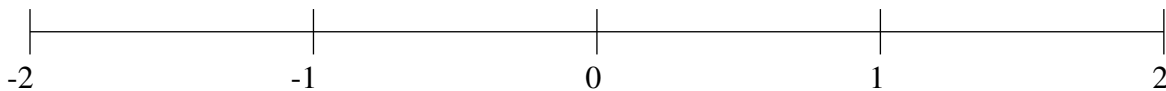
$$1\frac{41}{80}, \frac{1}{2}, -\frac{27}{71}, 1\frac{3}{16}, \frac{53}{60}$$



$$\frac{47}{99}, -1\frac{2}{3}, 1\frac{26}{47}, -\frac{11}{17}, -\frac{2}{13}$$



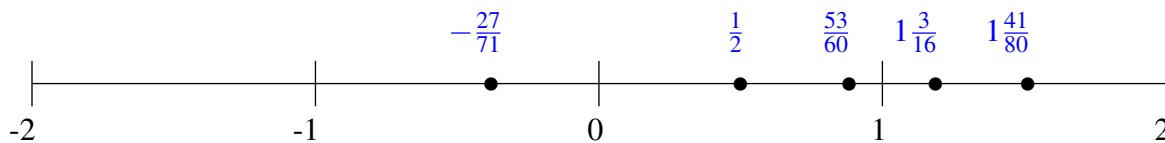
$$-\frac{23}{65}, 1\frac{5}{9}, 1\frac{2}{13}, \frac{4}{83}, \frac{38}{65}$$



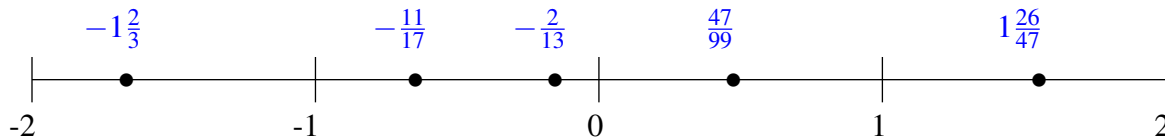
Classification de Fractions (A) Solutions

À l'aide des droites numériques, classifiez chaque série de fractions ci-dessous en ordre croissant.

$$1\frac{41}{80}, \frac{1}{2}, -\frac{27}{71}, 1\frac{3}{16}, \frac{53}{60}$$



$$\frac{47}{99}, -1\frac{2}{3}, 1\frac{26}{47}, -\frac{11}{17}, -\frac{2}{13}$$



$$-\frac{23}{65}, 1\frac{5}{9}, 1\frac{2}{13}, \frac{4}{83}, \frac{38}{65}$$

