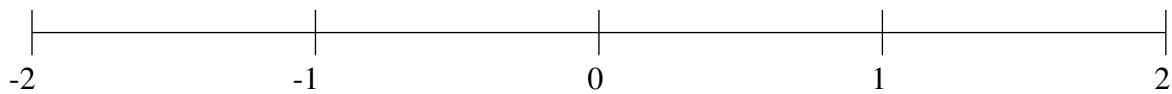


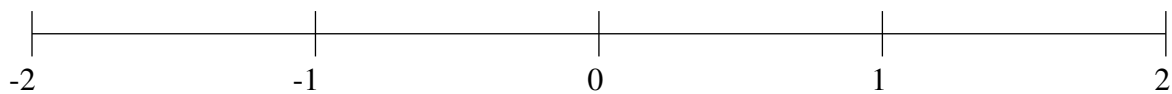
## Classification de Fractions (I)

À l'aide des droites numériques, classifiez chaque série de fractions ci-dessous en ordre croissant.

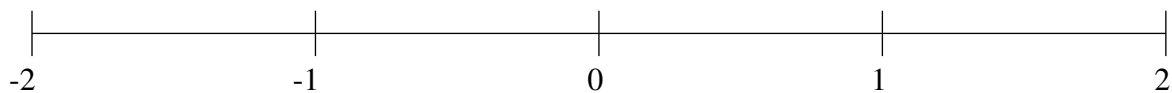
$$1\frac{5}{8}, -1\frac{3}{4}, -\frac{1}{2}, -1\frac{3}{8}, \frac{1}{2}$$



$$-\frac{1}{2}, -1\frac{5}{6}, \frac{1}{2}, 1\frac{2}{3}, -1\frac{1}{3}$$



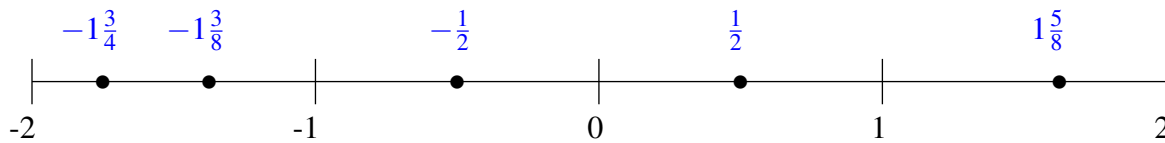
$$\frac{1}{3}, -\frac{7}{8}, -1\frac{1}{4}, -\frac{1}{3}, 1\frac{1}{2}$$



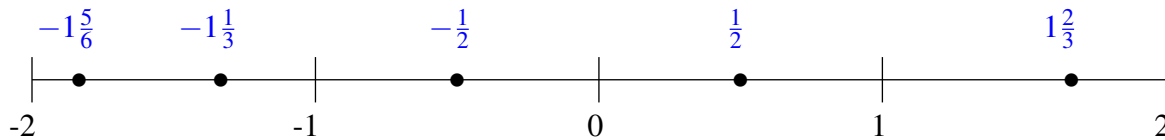
## Classification de Fractions (I) Solutions

À l'aide des droites numériques, classifiez chaque série de fractions ci-dessous en ordre croissant.

$$1\frac{5}{8}, -1\frac{3}{4}, -\frac{1}{2}, -1\frac{3}{8}, \frac{1}{2}$$



$$-\frac{1}{2}, -1\frac{5}{6}, \frac{1}{2}, 1\frac{2}{3}, -1\frac{1}{3}$$



$$\frac{1}{3}, -\frac{7}{8}, -1\frac{1}{4}, -\frac{1}{3}, 1\frac{1}{2}$$

